

GOVT HIGHER PRIMARY SCHOOL

TQ.

Std : 3

Second Summative Evaluation (Bilingual)- 2023-24

Marks : 40

Subject : Mathematics


Student Name : _____

Date : _____

Roll NO : _____


1. Tick the heaviest object.

$\frac{1}{2} \times 2 = 1$



2. Write whether the following objects are more or less than half kg .

$1 \times 3 = 3$



3. Fill in the blanks by looking at the pictures .

$1 \times 3 = 3$



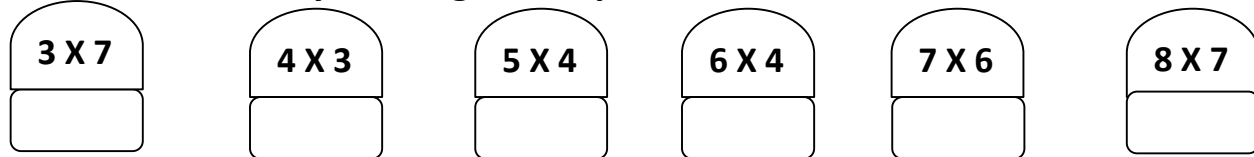
There are _____ groups.

There are _____ balloons in each group.

There are _____ balloons in all groups.

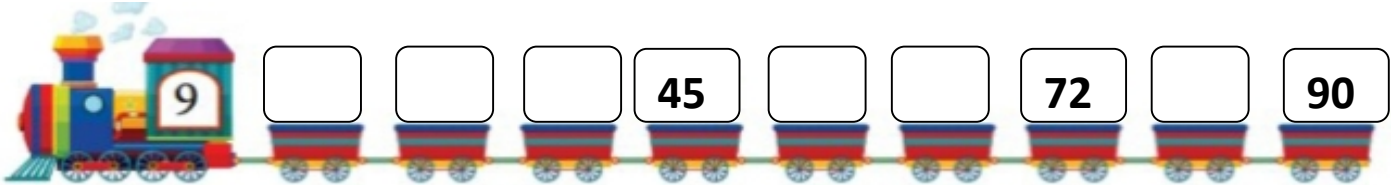
4. Fill in the blanks by looking at the pictures .

$1 \times 6 = 6$



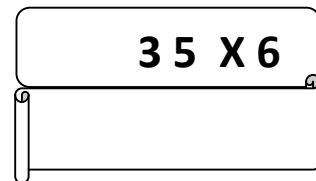
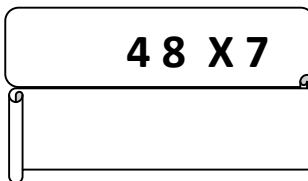
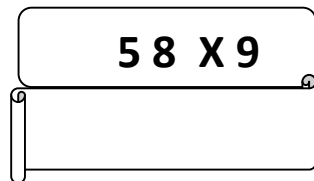
5. Fill in the blanks by looking at the pictures .

$1 \times 3 = 3$




6. Multiply .

$1 \times 3 = 3$



7. Complete the pattern .

$1 \times 2 = 2$



8. Write the following containers can hold more or less than half litre of liquid. 1X2=2



_____ than $\frac{1}{2}$ L



_____ than $\frac{1}{2}$ L



_____ than $\frac{1}{2}$ L

9. Add the notes and coins. 1X2=2



Rs _____

Rs _____

10. Solve the following. 1½X4=6

Rs, 55.50
+
Rs, 14.00

Rs, 30.00
+
Rs, 31.50

Rs, 25.50
--
Rs, 11.50

Rs, 103.50
--
Rs, 62.00

11. The following board shows no of students in each class, it also shows number of students present and absent in a classes. Answer the questions that follow. 1X5=5

Date 8/2/2007		Attendance Board	
Class	Number of students	Students present	Students absent
ತರಗತಿ	ವಿದ್ಯಾರ್ಥಿಗಳ ಸಂಖ್ಯೆ	ಹಾಜರಾಗಿರುವ ವಿದ್ಯಾರ್ಥಿಗಳು	ಗೈರುಹಾಜರಾಗಿರುವ ವಿದ್ಯಾರ್ಥಿಗಳು
Class I ತರಗತಿ	27	25	2
Class II ತರಗತಿ	23	22	1
Class III ತರಗತಿ	24	21	3
Class IV ತರಗತಿ	22	18	4
Class V ತರಗತಿ	25	23	2
Total ಒಟ್ಟು	_____	_____	_____

- How many children in all are there in the school _____
- How many children in all are absent on that day _____
- The class with the highest number of absent students is _____
- The class with the least number of absent students is _____
- The class with 3 students absent is _____

12. Divide into groups. 1X4=4

18 ÷ 2

40 ÷ 5

70 ÷ 10

48 ÷ 8
