

# GOVT HIGER PRIMARY SCHOOL

TQ.

Std : 2

Second Summative Evaluation (Bilingual)- 2023-24

Marks : 40

Subject : Mathematics

Student Name : \_\_\_\_\_

Date :

Roll NO : \_\_\_\_\_

1. Write the expanded form, one has been done for you.

1X2=2

25

|    |   |
|----|---|
| T  | O |
| 20 | 5 |

68

|   |   |
|---|---|
| T | O |
|   |   |

49

|   |   |
|---|---|
| T | O |
|   |   |

2. Add the number in the leaves.

1X2=2



3. Unscramble the words to make the names of week days.

1X4=4

1. D W E S E N A Y D -

2. U N A S Y D -

3. I R D F Y A -

4. D N M O Y A -

4. Tick the correct options.

1 X2=2

1. Which is the 4<sup>th</sup> month of the year ?

(a) April  (b) May  (c) March  (d) August

2. Which month comes after January ?

(a) March  (b) December  (c) February  (d) May

5. Let's see how fast you can add.

1X6=6

$6 + 2 + 4 = \square$

$4 + 7 + 6 = \square$

$6 + 9 + 2 = \square$

$2 + 8 + 5 = \square$

$2 + 8 + 5 = \square$

$4 + 4 + 4 = \square$

6. Add the notes and coins.

1 X2=2






Rs



Rs

7. Write the objects as standing, sleeping and slanting line.

1X3=3

8. Find the answer .

1X6=6

|   |   |   |   |   |   |
|---|---|---|---|---|---|
| $\begin{array}{r} \text{T O} \\ 73 \\ + 26 \\ \hline \end{array}$ | $\begin{array}{r} \text{T O} \\ 25 \\ + 64 \\ \hline \end{array}$ | $\begin{array}{r} \text{T O} \\ 84 \\ + 14 \\ \hline \end{array}$ | $\begin{array}{r} \text{T O} \\ 84 \\ - 32 \\ \hline \end{array}$ | $\begin{array}{r} \text{T O} \\ 83 \\ - 61 \\ \hline \end{array}$ | $\begin{array}{r} \text{T O} \\ 80 \\ - 20 \\ \hline \end{array}$ |
| <input type="text"/>  | <input type="text"/>  | <input type="text"/>  | <input type="text"/>  | <input type="text"/>  | <input type="text"/>  |

9. Tick the option Which has the longest footprint .

$\frac{1}{2} \times 2 = 1$

1.      

2.      

10. solve the following .

2X4=8

|   |   |   |   |
|---|---|---|---|
| $\begin{array}{r} 73 \\ 59 \\ \hline \end{array}$ | $\begin{array}{r} 48 \\ 38 \\ \hline \end{array}$ | $\begin{array}{r} 43 \\ 27 \\ \hline \end{array}$ | $\begin{array}{r} 68 \\ 13 \\ \hline \end{array}$ |
| <input type="text"/>                              | <input type="text"/>                              | <input type="text"/>                              | <input type="text"/>                              |

11. Count and write the number of shapes.

1X4=4

