



EVS - Q & Answers

CLICK & JOIN









KALIKA CHETHARIKE - Important Questions for Practice

1. Identify the agricultural equipment's.



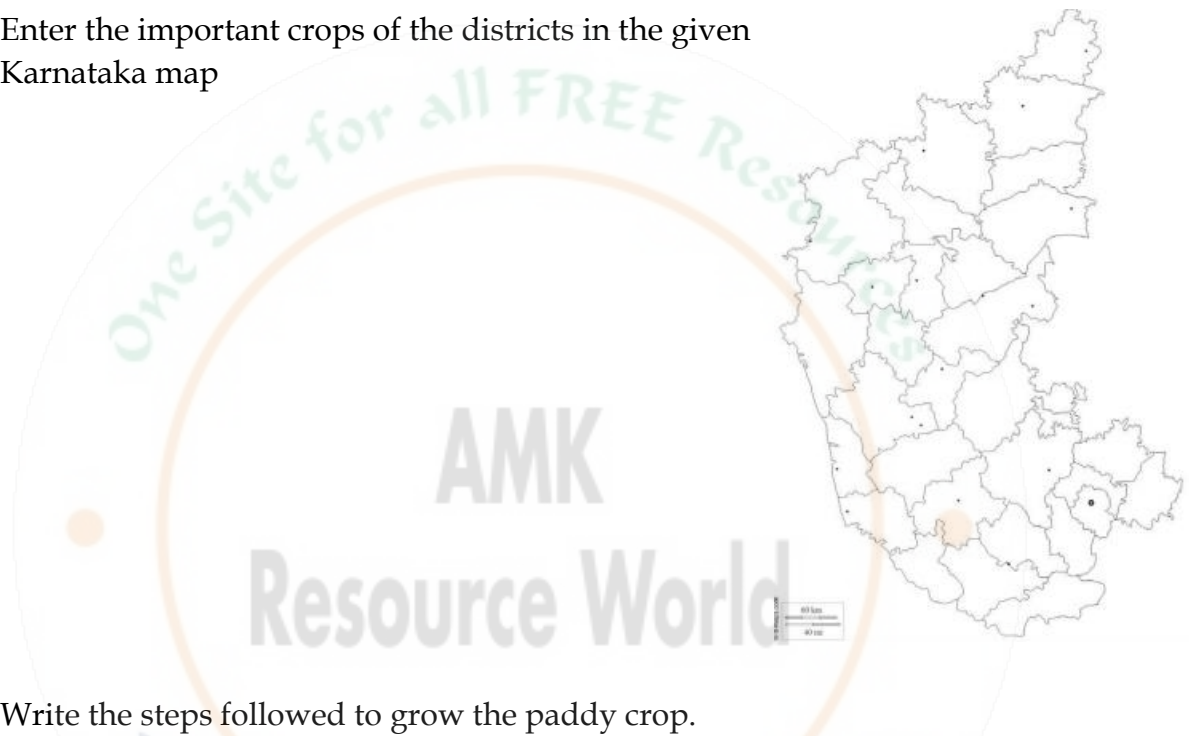
2. Observe the following pictures, by drawing line match the statement with the correct picture.

	Protecting the crop from Animal Bird, insects and diseases.
	Ploughing the land to grow the crop.
	Sowing the seed to grow the crop.
	Using the chemical or organic fertilizer to grow the crop well.
	Harvesting the crop.
	Watering.

3. Write in sequence the steps followed by the farmers to grow the crop
4. Make a list of the crops from the given table.

C	S	R	A	G	I	M
O	U	D	H	K	O	A
C	G	T	E	S	L	N
O	A	K	T	E	A	G
N	R	C	A	N	E	O
U	B	A	N	A	N	A
T	J	O	W	A	R	O

5. Enter the important crops of the districts in the given Karnataka map



6. Write the steps followed to grow the paddy crop.
7. List out the common agricultural equipment's available in farmers home
8. classify the following crops into rain based crops and irrigation based crops.
[Ragi, Paddy, Corn, Groundnut, Wheat, Green gram, flax, sugarcane, Areca nut, Bengalgram, black gram, millets, arca, bajra, horsebean, cotton, mango, tamarind.]
9. Why in recent years the farmers are advised to implement drip irrigation method?
10. Differentiate/Write 2 differences between drip irrigation and spray irrigation method?
11. Have you experienced hungry for whole day without having food?
 - (a) How do you know that you are Hungry?
 - (b) What is your experience when you are hungry?
12. Is there any changes during starvation while doing your daily work?
13. List out the food that you and your friend consume daily?

14. Let us find out what all benefits our body gets by the food we consume? * Do you know who I am? Yes I am potato, if I would be in your food I will give energy so I belong to carbohydrates group. Write the names of food items which gives energy like me



15. Do you know why you are advised to drink milk everyday? I have the protein nutrient that is needed for your growth. Then which other food items helps in your growth?



16. I am Ghee - used in preparation of sweets and cooking. We are called as lipids and we provide energy like carbohydrates. The body needs us in very less amount. The other items which belongs to our group are



17. The vitamins and minerals play an important role to maintain good health and activities of body even though our body needs very less amount. They are available in fruits and vegetables like below



18. Make a list of Food for energy, Food for growth, Food which provides protection to body

19. Name the important nutrients of food materials in the given pictures




20. Why do we eat food?

21. List out the ingredients present in today's food prepared in school and the nutrients present in them.

22. Observe the given food materials and sort them into food materials from plant sources and food materials from animal sources




23. Name some food materials which can be eaten raw.
24. Which Food materials can be eaten raw as well as cooked?
25. List out the millets (Siri Dhanya) which are considered as barn of nutrients.
26. Discuss and write, whether consuming same type of food everyday is good for our health?
27. Write the natural resources used by plant in their food preparation
28. List the materials used to make furniture at your home/school
29. List the animals used as food that you know
30. List the fuel used for the following vehicles
 - a. Bus
 - b. Truck
 - c. Car/Bike
 - d. Rail
 - e. Autorickshaw
31. Name the type of resource by observing the pictures given below. (Renewable / non-renewable)



32. Name the type of Renewable / non- renewable Resources in the following list

a. Coal	f. Forest
b. Wind	g. Wild animals
c. Petrol	h. Gold
d. Bio-Gas	i. Water
e. Solar Energy	j. Kerosene
33. Identify the pictures given below and name the metals used for their preparation



34. Write the uses of the natural resources given below

- a. Soil
- b. Forests
- c. Solar Energy
- d. Animals
- e. The fossil Fuels
- f. Minerals

35. List out the Natural resources

36. Soil and Solar power belongs to which type of the natural resources? Write the necessity of these resources.

37. Fill the following table based on characteristics of the materials given.

(Put right mark for applicable characteristics and × mark wherever not applicable.)

Sl. No.	Objects	Features								
		Heavy	Light	Soft	Hard	Floating	Sinking	Flowing	Melting	Insoluble
1	Stone									
2	Stick									
3	Sugar									
4	Paper									
5	Bread									
6	Piece of Chalk									
7	Brick									
8	Ice									
9	Cotton									
10	Water/ Juice									
11	Buttermilk									

38. What will happen if you put some more water to the vessel completely filled with water?

39. Does water fills up when an empty pot/tumbler/bottle is immersed in water upside down?

40. What is matter?

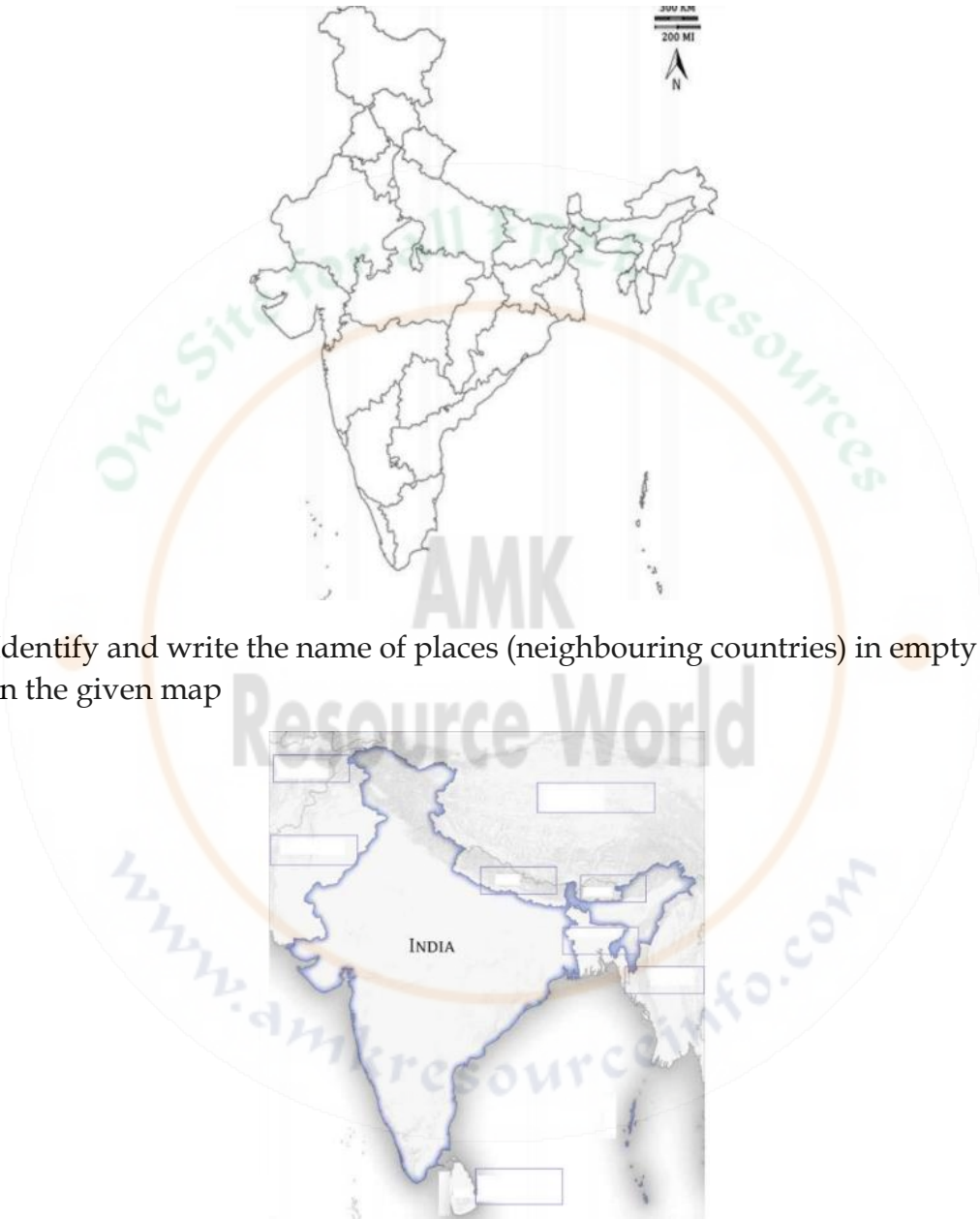
41. Write two characteristics of matter.

42. Observe the pictures given below and write the name of the material suitable to column in the table

 The iceberg	 Honey	 Book	 The ball
 Smoke	 Milk	 Bat	 Smoke
 Oil	 Bangle	 Juice	 Cooker

Solid	Liquid	Gas

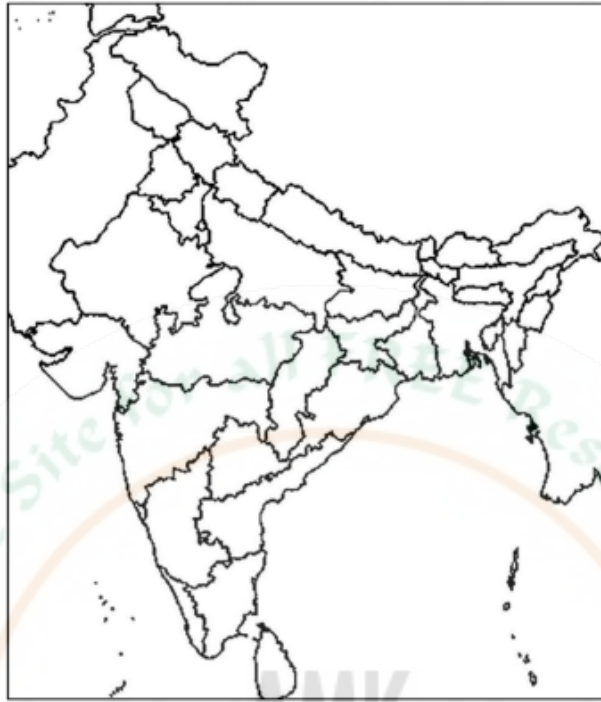
43. Classify the following materials into Solid, Liquid and Gas
 Stone, buttermilk, candle, Curd, charcoal, honey, brick, book, milk, smoke, iron, oxygen, petrol, Fragrance of flower, nitrogen, coin
44. How do we classify the materials based on arrangements of particles in it?
45. What are the effects of heat on matter?
46. Identify our state Karnataka in the map of India and colour it with red colour



47. Identify and write the name of places (neighbouring countries) in empty boxes in the given map

48. Write States of India, their capitals and mother tongue with the help of India map
49. List out the neighbouring states of Karnataka and identify them in the map
50. Identify Your district in the map and list out the neighbouring districts

51. Name the capitals of the following states. A) Kerala B) Gujarat C) Tamil Nadu
D) Manipur
52. Color only the union territories in the given India Map



53. Write the Neighbouring countries of India
54. Write the Union Territories of India
55. Write the Northern states of India
56. Write the Southern states of India
57. List out the neighboring countries of India, mention their direction

CLICK & JOIN

