

Academic year  
2021-22

S S L C SOCIAL SCIENCE

# AVALOKANA

{INTERNAL ASSESSMENT REGISTER}



Prepared by:  
Santhosh kumar

Translated by:  
Prashantha T K



# SOCIAL SCIENCE

**CLASS**



**10**

**INTERNAL**

**ASSESSMENT**

<b>Name of the student</b>	
<b>Reg No</b>	
<b>Education year</b>	
<b>Subject</b>	
<b>Fecilitator</b>	

# Index

Sl. No	Subject	Total Marks	Obtained Marks
1	Activity/Project work:-1	15	
2	Activity/Project work:-2	15	
3	Achievement Test:-1	20	
4	Activity/Project work:-3	15	
5	Activity/Project work:-4	15	
6	Achievement Test:-2	20	
7	Activity/Project work:-5	15	
8	Activity/Project work:-6	15	
9	Achievement Test:-3	20	
10	Activity/Project work:-7	15	
11	Activity/Project work:-8	15	
12	Achievement Test:-4	20	
Total Marks		200	
Internal assessment Marks		20	

Student  
Signature

Parents  
Signature

Fecilitator  
Signature

# Formative assessment - 01

**Activity:-1 Review the textbook & collect the following information.**

**Class : 10**

**Name of the student**


**Sub : Social science**

**Who Am I?**


Dual government introduced by




Subsidiary alliance introduced by



Last ruler of Peshwa



Doctrine of lapse introduced by



**I. Fill in the blanks with suitable word:**

- 1) Institution like Lokayukta established for bring down \_\_\_\_\_.
- 2) Blue water policy introduced by \_\_\_\_\_.
- 3) \_\_\_\_\_ founded the Civil court called Diwani Adalat.
- 4) Turks captured \_\_\_\_\_ city in 1453.
- 5) The fifth group after Shudra in Varna system \_\_\_\_\_.
- 6) \_\_\_\_\_ was the first state to enter Subsidiary alliance.
- 7) \_\_\_\_\_ argued in favour of 'Education as a public property'.

Major forms of Social stratification
1
2
3
4
5

**II. Note the relationship of the first two words & write the appropriate word for the third word:**

- 1) Untouchability Offence Act: 1955 :: Protection of Civil Rights Act:.....
- 2) French : Pondicherry :: Portuguese : .....
- 3) Lord Cornwallis: Police system:: Warren Hastings:.....
- 4) Dastaks : Faruk Siar:: Diwani rights:.....
- 5) Anglo-Maratha war : Salbai treaty:: Anglo-Sikh war:.....
- 6) Uniform civil code : Communalism:: Women's commissions:.....

Complete these with the help of Textbook		
	Reasons	Remedial measures
Unemployment		
Corruption		

**Write the main features of the following Constitution articles:**

Act	Importance
17	
21A	
45	
46	
371J	

# Formative assessment - 01

**Activity:-2 Review the textbook & collect the following information.**

**Class : 10**

**Name of the student**

**Sub : Social science**

4 Physical divisions of India
3 elements of Economic development

- I. Fill in the blanks with suitable word:**
- 1) \_\_\_\_\_ latitude passes through the middle of the country.
  - 2) National income ÷ Population of country = \_\_\_\_\_.
  - 3) \_\_\_\_\_ is known as 'Bankers Bank'.
  - 4) \_\_\_\_\_ is the coldest month in India.

**II. Match the following:**

- |                      |  |
|----------------------|--|
| 'A'                  | 'B'                                    |
| 1. Savings account   | A) Business & Business organization    |
| 2. Current account   | B) Who expect highest rate of interest |
| 3. Recurring deposit | C) Who have a fixed regular income     |
| 4. Fixed deposit     | D) For future requirements             |

**III. Note the relationship of the first two words & write the appropriate word for the third word:**

- 1) Lowest temperature: Dras in Kashmir :: Highest temperature: \_\_\_\_\_
- 2) Highest rainfall: Mawsinram :: Lowest rainfall: \_\_\_\_\_
- 3) Kerala :Mango showers:: Karnataka : \_\_\_\_\_

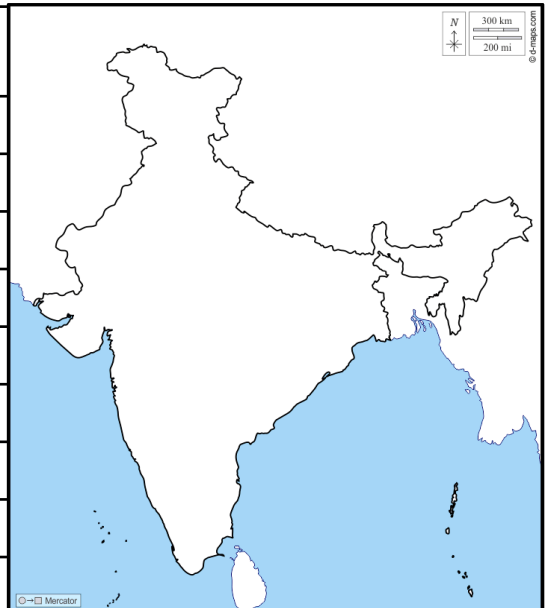
Functions/services of Banks

**List out the differences given below:**

Eastern ghats	Western ghats	Eastern coast	Western coast

**Name the following & mark them on the map of India  
(Write only the serial number)**

S.No	Information	Name them
1	Capital of India	
2	Northern tip of India	
3	Southern most tip of India	
4	Capital of Karnataka	
5	Highest peak of India	
6	Highest peak in Aravalli	
7	Highest peak in South India	
8	Eastern & Western ghats meets at	



Sub:Social science

# Formative assessment-01

Class:10

## Achievement Test 01

Name of the student:

Obtained Marks	
Total Marks	20



# Formative assessment - 02

**Activity:-3 Review the textbook & collect the following information.**

**Class : 10**

**Name of the student**

**Sub : Social science**


**Name these Anti British leaders.**



**I. Fill in the blanks with suitable word:**

- 1) Division of labour leads to \_\_\_\_\_.
- 2) \_\_\_\_\_ country attacked on India in 1962.
- 3) \_\_\_\_\_ formulated the foreign policy of India.
- 4) \_\_\_\_\_ founded the Anglo-Oriental college.
- 5) Chennamma adopted a boy named \_\_\_\_\_.

<b>Important futures of India's foreign policy.</b>




**II. Match the following:**

‘A’


‘B’

- |                           |                           |
|---------------------------|---------------------------|
| 1. Madras treaty          | A)Third Anglo-Mysore war  |
| 2. Mangalore treaty       | B)First Anglo-Mysore war  |
| 3. Srirangapattana treaty | C)Second Anglo-Mysore war |



**III. Note the relationship of the first two words & write the appropriate word for the third word :**





- 1)Tashkent treaty: India-Pakistan :: Panchasheela principles:.....
- 2)Lord Wellesly: Subsidiary allaiance:: Lord Dalhousie:.....
- 3) Rebellion of Halagali : Disarmament act ::Rebellion Kitturu : .....
- 4)Rebellion of Amara Sullya: Puttabasappa:: Rebellion of Surapur:.....
- 5)Prarthana samaj: Atmaram Panduranga:: Ramakrishna mission : .....



Listout the differences given below:	
Organized workers	Un organized workers

<b>Name the 2 types of Labour</b>

**Identify these Social reformers & write the essential informations**

Essential informations				
Name of the reformer:				
Name of the Society				
News paper/Books				
Important reformations				



# Formative assessment - 02

Activity:-4 Review the textbook & collect the following information.

Class : 10

Name of the student

Sub : Social science

Name these Entrepreneurs



**I. Fill in the blanks with suitable word:**

- 1) The word entrepreneur is derived from the French word \_\_\_\_\_.
- 2) The concept 'Grama swarajya' propogated by \_\_\_\_\_.
- 3) Highest Paddy growing state in India \_\_\_\_\_.
- 4) The birth place of River Krishna is \_\_\_\_\_.
- 5) Bandipura National park is in \_\_\_\_\_ state.
- 6) \_\_\_\_\_ soil is suitable for cotton crop.

**II. Match the following:**

- |                  |                                     |
|------------------|-------------------------------------|
| <b>A</b>         | <b>B</b>                            |
| 1. Alluvial soil | a)Weathering of crystalline rocks   |
| 2. Black soil    | b)Decomposition of organic matter   |
| 3. Red soil      | c)Weathering of Basalt rocks        |
| 4. Laterite soil | d)Sediments deposited by the rivers |
| 5. Mountain soil | Heavy rainfall & high temperature   |

Listout the types of agriculture:


**Listout the differences given below:**

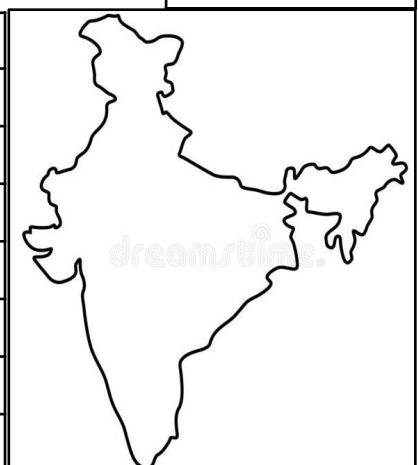
Evergreen forests	Deciduous forests
Mountain forests	Mangroove forests

Crop seasons of India:


Three tier of Panchayat raj system.


**Name the following & mark them on the map of India**

S.No	Information	Name it
1	The longest river of South India	
2	Important river valley project of Odisha	
3	International river valley project of India	
4	First river valley project of India	
5	Another name of Tungabhadra project	
6	Rises in Amarakantaka hills & flows Westward.	













# Formative assessment - 03

Activity:-5 Review the textbook & collect the following information.

Class : 10

Name of the student

Sub : Social science

<p style="text-align: center;">Name the freedom fighters of India:</p>	<p><b>I. Fill in the blanks with suitable word:</b></p> <p>1) The 1857 revolt first brokeout in _____.</p> <p>2) Indian national congress established in _____.</p> <p>3) Gandhiji start civil disobedience movement in _____.</p> <p>4) Human rights day celebrated on _____.</p> <p>5) Narmada andolana starts under the leadership of _____</p>	<p style="text-align: center;">Name the important environmental movements :</p>												
	<p><b>II. Match the following:</b></p> <table style="width: 100%; border: none;"> <tr> <td style="text-align: center; width: 50%;">A</td> <td style="text-align: center; width: 50%;">B</td> </tr> <tr> <td>1. Subhashchandra bose</td> <td>a)Mookanayaka,Prabhudda Bharat</td> </tr> <tr> <td>2. Dr.B R Ambedkar</td> <td>b)Swaraj party</td> </tr> <tr> <td>3. Jawaharlal Nehru</td> <td>c)Young India &amp; Harijan</td> </tr> <tr> <td>4. Motilal Nehru</td> <td>d)Forward block</td> </tr> <tr> <td>5.Mahatma Gandhiji</td> <td>First Prime minister of India</td> </tr> </table>	A	B	1. Subhashchandra bose	a)Mookanayaka,Prabhudda Bharat	2. Dr.B R Ambedkar	b)Swaraj party	3. Jawaharlal Nehru	c)Young India & Harijan	4. Motilal Nehru	d)Forward block	5.Mahatma Gandhiji	First Prime minister of India	
A	B													
1. Subhashchandra bose	a)Mookanayaka,Prabhudda Bharat													
2. Dr.B R Ambedkar	b)Swaraj party													
3. Jawaharlal Nehru	c)Young India & Harijan													
4. Motilal Nehru	d)Forward block													
5.Mahatma Gandhiji	First Prime minister of India													
	<p><b>III. Answer the following questions in a sentence/word:</b></p> <p>1) Who are the Moderates?</p> <p>2) Who are the Radicles?</p> <p>3) What is Disarmament?</p>	<p style="text-align: center;">Important commissions to protect human rights in India.</p>												
														
														
	<p style="text-align: center;"><b>Write the necessary informations about the the following</b></p> <table border="1" style="width: 100%; border-collapse: collapse;"> <tr> <td style="width: 50%; padding: 5px;">Reasons for the failure of 1857 revolt</td> <td style="width: 50%; padding: 5px;">Non co-operative in freedom movement</td> </tr> <tr> <td style="height: 100px;"></td> <td style="height: 100px;"></td> </tr> </table>	Reasons for the failure of 1857 revolt	Non co-operative in freedom movement											
Reasons for the failure of 1857 revolt	Non co-operative in freedom movement													
														

# Formative assessment - 03

**Activity:-6 Review the textbook & collect the following information.**

**Class : 10**

**Name of the student**

**Sub : Social science**

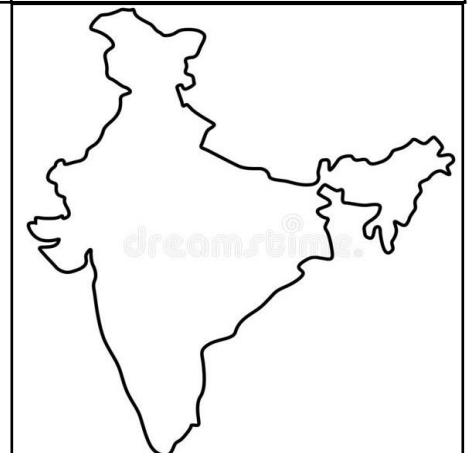
<p><b>Evaluation of money:</b></p>	<p><b>I. Fill in the blanks with suitable word:</b></p> <p>1) Shivana Samudra hydro power station is in _____ state.</p> <p>2) Important ferro-alloy metal of India is _____.</p> <p>3) Bombay Samachar news paper starts in the year _____.</p> <p>4) Kempegowda air port is situated in _____ city.</p> <p>5) Reserve Bank of India established in the year _____.</p> <p>6) Head quarters of World trade centre is in _____ city.</p>	<p><b>Hydro electric power stations of Karnataka:</b></p>										
	<p><b>II. Match the following:</b></p> <table style="width: 100%; border: none;"> <tr> <td style="width: 50%; text-align: center;"><b>A</b></td> <td style="width: 50%; text-align: center;"><b>B</b></td> </tr> <tr> <td>1. Sundar ghar</td> <td>a)Bauxite ore deposition</td> </tr> <tr> <td>2. Nallore</td> <td>b)Iron ore deposition</td> </tr> <tr> <td>3. Kalahandi</td> <td>c)Crud oil deposition</td> </tr> <tr> <td>4. Bombay High</td> <td>d)Mica ore deposition</td> </tr> </table>	<b>A</b>	<b>B</b>	1. Sundar ghar	a)Bauxite ore deposition	2. Nallore	b)Iron ore deposition	3. Kalahandi	c)Crud oil deposition	4. Bombay High	d)Mica ore deposition	
<b>A</b>	<b>B</b>											
1. Sundar ghar	a)Bauxite ore deposition											
2. Nallore	b)Iron ore deposition											
3. Kalahandi	c)Crud oil deposition											
4. Bombay High	d)Mica ore deposition											
<p><b>Types of communication:</b></p>		<p><b>Write the types of Roads</b></p>										

**Write the informations about the the following**

<p>Functions of Reserve Bank of India</p>	<p>Advantages of Globalization</p>	<p>Importance of transport</p>

**Name the following & mark them on the map of India**

S.No	Information	Name them
1	Known as Gate way of India	
2	Known as Gate way of Karnataka	
3	Known as the Queen of the Arabian sea	
4	Oldest & artificial port of Tamilnadu	
5	Second highest port of India	
6	Important port of Andhra pradesh	







# Formative assessment - 04

**Activity:-7 Review the textbook & collect the following information.**

**Class : 10**

**Name of the student**

**Sub : Social science**

**Name these Social problems:**



- I. Fill in the blanks with suitable word:**
- 1) Prohibition of child marriage Act has come into effect in \_\_\_\_.
  - 2) International court of justice is located in \_\_\_\_\_.
  - 3) Present Secretary general of UNO \_\_\_\_\_.
  - 4) The last Governor general of company was \_\_\_\_\_.
  - 5) State reorganization Act has come into effect in \_\_\_\_\_.

**UN affiliated bodies:**




- II. Match the following**
- |                         |                                       |
|-------------------------|---------------------------------------|
| <b>A</b>                | <b>B</b>                              |
| 1. Vladimir Ilich Lenin | a) Founder of Nazi party              |
| 2. Joseph Stalin        | b) Leader of October Revolution       |
| 3. Adalof Hitler        | c) Leader of Communist China          |
| 4. Mussolini            | d) Introduce Five year plan in Russia |
| 5. Mao Tse Tung         | e) Dictator of Fascist party          |



**Complete the following incomplete informations**

Organization	Estd.Year	Head quarter
Food & agriculture organization		
World health organization		
UNESCO		
IMF		
IBRD		
World trade organization		
SAARC		

**Name these:**





**Write the necessary informations about the the following**

Reasons for First world war	Reasons for Child labour/Child Marriage	Achievements of Economic & social council



# Formative assessment - 04

Activity:-8 Review the textbook & collect the following information.

Class : 10

Name of the student

Sub : Social science

Name the consumer rights:	<p>I. Fill in the blanks with suitable word:</p> <p>1) World consumer day is celebrated every year on _____.</p> <p>2) Consumer is regarded as _____.</p> <p>3) The central budget is presented in the Lok sabha by _____.</p> <p>4) GST has been implemented from the date _____.</p> <p>5) Total population of India according to 2011 census is _____.</p> <p>6) The destructive disaster associated with atmosphere _____.</p> <p>7) _____ is the industrial based industry in India.</p> <p>II. Match the following</p> <table style="width:100%; border:none;"> <tr> <td style="width:50%; text-align:center;">A</td> <td style="width:50%; text-align:center;">B</td> </tr> <tr> <td>1. Mumbai</td> <td>a)First paper industry of India</td> </tr> <tr> <td>2. Serampura</td> <td>b)Silicon valley of India</td> </tr> <tr> <td>3. Jaykay nagara</td> <td>First Iron &amp; Steel industry of India</td> </tr> <tr> <td>4. Bengaluru</td> <td>d)Manchester of India</td> </tr> <tr> <td>5. Kulti</td> <td>e)First alluminium industry of India</td> </tr> </table>	A	B	1. Mumbai	a)First paper industry of India	2. Serampura	b)Silicon valley of India	3. Jaykay nagara	First Iron & Steel industry of India	4. Bengaluru	d)Manchester of India	5. Kulti	e)First alluminium industry of India	Factors of localization of industries:
A	B													
1. Mumbai	a)First paper industry of India													
2. Serampura	b)Silicon valley of India													
3. Jaykay nagara	First Iron & Steel industry of India													
4. Bengaluru	d)Manchester of India													
5. Kulti	e)First alluminium industry of India													
Three stages of Consumer courts:		Name the two types of tax:												

Write the informations about the the following

Importance of Industries in economic development	Effects of Earthquake/Flood	Information in the complaint filed by the consumer court

Name the following & mark them on the map of India

S.No	Information	Name it
1	Having highest population state	
2	Having lowest population state	
3	Having highest population density state	
4	Having lowest population density state	







**CLICK HERE TO VIEW MY CHANNEL**

**You**  **Tube**

**CLICK HERE TO VIEW MY BLOG**

