



Government of Karnataka

Dakshina Kannada Zilla Panchayat

Department of Public Instruction

Dakshina Kannada

District Institute Of Education and Training



Mangalore, D.K



Nishitha



MCQ Based Question Bank

2020-21

ಸಂದೇಶ



ಡಾ. ಕುಮಾರ್, ಐ.ಎ.ಎಸ್
ಮುಖ್ಯ ಕಾರ್ಯನಿರ್ವಹಣಾಧಿಕಾರಿಗಳು,
ದಕ್ಷಿಣ ಕನ್ನಡ

ಮುಖ್ಯ ಕಾರ್ಯನಿರ್ವಹಣಾಧಿಕಾರಿಗಳ ಕಾರ್ಯಾಲಯ
ಜಿಲ್ಲಾ ಪಂಚಾಯತ್ ಕಟ್ಟಡ
ಅಶೋಕನಗರ
ಮಂಗಳೂರು, ದಕ್ಷಿಣ ಕನ್ನಡ ಜಿಲ್ಲೆ
575006

ಕೋವಿಡ್-19 ಸಾಂಕ್ರಾಮಿಕ ರೋಗದಿಂದಾಗಿ ಕಳೆದ ಒಂದು ವರ್ಷದಿಂದ ಶೈಕ್ಷಣಿಕ ಪ್ರಗತಿ ಕುಂಠಿತವಾಗಿ ವ್ಯತಿರಿಕ್ತ ಪರಿಣಾಮ ಬೀರುತ್ತಿದೆ. ಆದಾಗ್ಯೂ ವಿದ್ಯಾರ್ಥಿಗಳ ಶೈಕ್ಷಣಿಕ ಪ್ರಗತಿಗೆ ಅನುಕೂಲವಾಗುವ ದೃಷ್ಟಿಯಿಂದ 10ನೇ ತರಗತಿ ಪಠ್ಯಕ್ರಮ ಹಾಗೂ ಪರೀಕ್ಷಾ ಪದ್ಧತಿಗೆ ಅನುಗುಣವಾಗಿ ಬಹುಅಂಶ ಆಯ್ಕೆ ಪ್ರಶ್ನಾಕೋಶ [Multiple Choice Question Bank] ನ್ನು ದಕ್ಷಿಣ ಕನ್ನಡ ಸಾರ್ವಜನಿಕ ಶಿಕ್ಷಣ ಇಲಾಖೆಯ ಸಂಪನ್ಮೂಲ ಶಿಕ್ಷಕರ ತಂಡ ಹಾಗೂ ಅಧಿಕಾರಿ ವರ್ಗದವರು ಒಟ್ಟುಗೂಡಿ ರಚನೆ ಮಾಡಿರುತ್ತಾರೆ.

ಶೈಕ್ಷಣಿಕ ಹಿತದೃಷ್ಟಿಯಿಂದ ಇದರ ಸದುಪಯೋಗವನ್ನು ಜಿಲ್ಲೆಯ ಎಲ್ಲ ವಿದ್ಯಾರ್ಥಿಗಳು ಪಡೆದುಕೊಂಡು ಮುಂಬರುವ ಪರೀಕ್ಷೆಯಲ್ಲಿ ಉತ್ತಮ ಸಾಧನೆ ಮಾಡುವಂತಾಗಲಿ ಎಂದು ಹಾರೈಸುತ್ತೇನೆ. ಈ ಕಾರ್ಯದಲ್ಲಿ ತೊಡಗಿಕೊಂಡ ಎಲ್ಲರಿಗೂ ಅಭಿನಂದನೆಗಳು.

ಶುಭಾಶಯಗಳು

17-06-2021

(ಡಾ. ಕುಮಾರ್, ಐ.ಎ.ಎಸ್)
ಮುಖ್ಯ ಕಾರ್ಯನಿರ್ವಹಣಾಧಿಕಾರಿಗಳು
ದಕ್ಷಿಣ ಕನ್ನಡ ಜಿಲ್ಲಾ ಪಂಚಾಯತ್

ಮುನ್ನುಡಿ

ಉಪನಿರ್ದೇಶಕರು (ಆಡಳಿತ)
ಸಾರ್ವಜನಿಕ ಶಿಕ್ಷಣ ಇಲಾಖೆ ಮಂಗಳೂರು,
ದಕ್ಷಿಣ ಕನ್ನಡ ಜಿಲ್ಲೆ-575001

ಕೋವಿಡ್-19ರ ಕಾರಣ ಬದಲಾದ ಸನ್ನಿವೇಶಕ್ಕೆ ಮತ್ತು ಬದಲಾದ ಪರೀಕ್ಷಾ ಪದ್ಧತಿಗೆ ಅನುಕೂಲವಾಗುವಂತೆ ಎಲ್ಲ ವಿಷಯಗಳ ಪ್ರಶ್ನಾಕೋರಿಯನ್ನು ತಯಾರಿಸಲಾಗಿದ್ದು ಇದರಲ್ಲಿನ ಪ್ರಶ್ನೆಗಳಿಗೆ ಉತ್ತರಿಸಲು ಅಭ್ಯಾಸ ಮಾಡುವ ಮೂಲಕ ಅಂತಿಮ ಪರೀಕ್ಷೆಯನ್ನು ಆತ್ಮವಿಶ್ವಾಸದಿಂದ ಎದುರಿಸಬಹುದಾಗಿದೆ. ಜಿಲ್ಲೆಯ ಎಲ್ಲಾ ಶಿಕ್ಷಕರು ಈ ಕೈಪಿಡಿಯನ್ನು ವಿದ್ಯಾರ್ಥಿಗಳಿಗೆ ತಲುಪಿಸಿ ಗರಿಷ್ಠ ಅಂಕಗಳನ್ನು ಪಡೆಯುವಂತೆ ಮಾರ್ಗದರ್ಶನ ಮಾಡಿದರೆ ವಿದ್ಯಾರ್ಥಿಗಳು ಯಶಸ್ಸನ್ನು ಗಳಿಸಬಹುದು.

ಪ್ರಶ್ನಾಕೋರಿಯನ್ನು ಶ್ರಮವಹಿಸಿ ಸಿದ್ಧಗೊಳಿಸಿದ ಸಂಪನ್ಮೂಲ ವ್ಯಕ್ತಿಗಳಿಗೆ, ಮಾರ್ಗದರ್ಶನ ನೀಡಿದ ಇಲಾಖೆಯ ಅಧಿಕಾರಿಗಳಿಗೆ ಧನ್ಯವಾದಗಳನ್ನು ಸಮರ್ಪಿಸುತ್ತೇನೆ.

ಶುಭವಾಗಲಿ.

17-06-2021

(ಮಲ್ಲೇಸ್ವಾಮಿ)
ಉಪನಿರ್ದೇಶಕರು(ಆಡಳಿತ)
ಸಾರ್ವಜನಿಕ ಶಿಕ್ಷಣ ಇಲಾಖೆ, ಮಂಗಳೂರು,
ದಕ್ಷಿಣ ಕನ್ನಡ ಜಿಲ್ಲೆ-575001

ನಿರ್ದೇಶನ

ಸಿಪ್ರಿಯಾನ್ ಮೊಂತೆರೋ

ಸಹ ನಿರ್ದೇಶಕರು ಹಾಗೂ ಪ್ರಾಂಶುಪಾಲರು, ಶಿಕ್ಷಕರ ಶಿಕ್ಷಣ ಮಹಾವಿದ್ಯಾಲಯ, ಮಂಗಳೂರು

ಪರಿಕಲ್ಪನೆ ಮತ್ತು ಮಾರ್ಗದರ್ಶನ

ಶ್ರೀ ಮಲ್ಲೇಸ್ವಾಮಿ, ಉಪನಿರ್ದೇಶಕರು (ಆಡಳಿತ ಮತ್ತು ಅಭಿವೃದ್ಧಿ)

ಸಾರ್ವಜನಿಕ ಶಿಕ್ಷಣ ಇಲಾಖೆ, ದಕ್ಷಿಣ ಕನ್ನಡ, ಮಂಗಳೂರು. ದ.ಕ.

ಮೇಲ್ವಿಚಾರಣೆ

ಶ್ರೀಮತಿ ರಾಜಲಕ್ಷ್ಮಿ

ಕ್ಷೇತ್ರ ಶಿಕ್ಷಣಾಧಿಕಾರಿಗಳು, ಮಂಗಳೂರು ದಕ್ಷಿಣ

ಶ್ರೀ ಸದಾನಂದ ಪೂಂಜ

ಕ್ಷೇತ್ರ ಶಿಕ್ಷಣಾಧಿಕಾರಿಗಳು, ಮಂಗಳೂರು ಉತ್ತರ

ಶ್ರೀಮತಿ ಬಬಿತ

ಹಿರಿಯ ಉಪನ್ಯಾಸಕರು, ಡಯೆಟ್ ಮಂಗಳೂರು

ಡಾ. ಪ್ರಶಾಂತ್ ಕೆ.ಎಸ್

ಕೇತ್ರ ಸಮನ್ವಯಾಧಿಕಾರಿಗಳು, ಮಂಗಳೂರು ದಕ್ಷಿಣ

ಶಂಕರಪ್ಪ ಮುದ್ದಾಳ್

ಕೇತ್ರ ಸಮನ್ವಯಾಧಿಕಾರಿಗಳು, ಮಂಗಳೂರು ಉತ್ತರ

ಸಲಹೆಗಾರರು :

ಡಾ. ಸುಮಂಗಲಾ ಎಸ್ ನಾಯಕ್

ಉಪನ್ಯಾಸಕರು, DIET ಮಂಗಳೂರು.

ಶ್ರೀಮತಿ ಚಂದ್ರಾವತಿ ಪಿ

ಉಪನ್ಯಾಸಕರು, DIET ಮಂಗಳೂರು.

ಶ್ರೀಮತಿ ವಿನೋದ ಬಿ

ಉಪನ್ಯಾಸಕರು, DIET ಮಂಗಳೂರು.

ಸಹಕಾರ

ಶ್ರೀಮತಿ ಜಯಶ್ರೀ

ಅಧ್ಯಕ್ಷರು, ಜಿಲ್ಲಾ ಪ್ರೌಢ ಶಾಲಾ ಮುಖ್ಯ ಶಿಕ್ಷಕರು ಹಾಗೂ ಪ.ಪೂ ಪ್ರಾಂಶುಪಾಲರ ಸಂಘ, ದಕ್ಷಿಣ ಕನ್ನಡ

ಸ್ನಾನಿ ತಾವೋ

ಅಧ್ಯಕ್ಷರು ಪ್ರೌಢ ಶಾಲಾ ಸಹ ಶಿಕ್ಷಕರ ಸಂಘ, ದಕ್ಷಿಣ ಕನ್ನಡ

Science Question Bank Resource Formation Team

Mr. Venkataraman Acharya

Government Pre University College Sajipamooda
Bantwal

Mr. Mark J. Mendonca

Government High School Kuppepadavu
Mangalore South

Mr. Subramanya. V

Government High School Aliyoor
Mudubidre

Mr. Shreesha Bhat

Government High School Koila
Bantwal

Mrs. Shubha Bhat N

Canara High School Mangalore
Mangalore North

Mrs. Prajna

Bharath High School Ullal
Mangalore South

Mr. Norbert F. Miranda

Besant National High School Kodialbail
Mangalore North

Mr. Raviraja Moleyar

Government High School Dolpady
Puttur

Mr. Venkatesh B

Government High School Sarve
Puttur

Mr. Balakrishna Gowda

Karnataka Public School Bellare
Sullia

Mr. Karuna S

Government High School Pavor
Mangalore South

Mr. Chandrashekara Bhat

Government High School Ajjavara,
Sullia

Mr. Mahendra Poojari G

Government High School Puthila
Belthanagady.

Mr. Sharif K. Sayad

Government High School Naravi
Belthangady

ALL THE HIGH SCHOOL SCIENCE TEACHERS OF DAKSHINA KANNADA

INDEX

Chapter Number	Chapter Name	Page Number
2	Acids, Bases and Salts	1
3	Metals and Non-metals	3
4	Carbon and Its Compounds	6
5	Periodic classification of Elements	10
6	Life Processes	13
7	Control and Coordination	16
8	How do Organisms Reproduce?	20
9	Heredity and Evolution	24
10	Light-Reflection and Refraction	27
12	Electricity	30
13	Magnetic Effects of Electric current	35
14	Sources of Energy	40
15	Our Environment	44
16	Sustainable Management of Natural Resources	45
	Answer Key	48

CHAPTER - 2

Acids, Bases and Salts

- A compound that turns lime water into colorless again when excess carbon dioxide is made to pass through it is, *
 - Calcium carbonate
 - Calcium bicarbonate
 - Calcium Oxide
 - Calcium Hydroxide
- The pH of four acids namely P, Q, R, S is 2, 5, 3, 6 respectively. The strongest acid among these acids is, *
 - P
 - Q
 - R
 - S
- Alkali oxide among the following oxides is, *
 - Carbon Dioxide
 - Sulfur Dioxide
 - Sodium oxide
 - Nitrogen oxide
- As the pH value of a solution decreases, **
 - Number of OH^- ions increases
 - Number of H^+ ions increases
 - Number of H^+ ions decreases
 - Equal number of OH^- and H^+ ions
- The gas liberated when dilute sulphuric acid reacts with zinc granules **
 - Sulphur dioxide
 - Carbon dioxide
 - Nitrogen
 - Hydrogen
- $\text{NaOH} + \text{HCl} \rightarrow \text{NaCl} + \text{H}_2\text{O}$. This chemical reaction is an example of **
 - Neutralization reaction
 - Substitution reaction
 - Addition reaction
 - Combustion reaction
- If a solution turns red litmus into blue, its pH value is
 - 1
 - 4
 - 5
 - 10
- A solution reacts with crushed egg-shells and releases a gas that turns lime-water milky. The solution contains,
 - NaCl
 - HCl
 - LiCl
 - KCl

9. 10 mL of a solution of NaOH is found to be completely neutralized by 8 mL of a given solution of HCl. If we take 20 mL of the same solution of NaOH, the amount HCl solution (the same solution as before) required to neutralize it will be,
- A. 4 ml
B. 8 ml
C. 12 ml
D. 16 ml
10. In solutions, we use pH scale to measure,
- A. Density
B. H^+ ion concentration
C. OH^- ion concentration
D. Conductivity
11. Which one of the following types of medicines is used for treating indigestion?
- A. Antibiotic
B. Analgesic
C. Antacid
D. Antiseptic
12. $2NaOH + Zn \rightarrow \dots\dots\dots + H_2$
- A. Na_2ZnO_2
B. $NaZnO_2$
C. Na_2ZnO
D. $NaZnO$
13. The acid present in the stinging hair of nettle leaves that causes burning pain
- A. Citric acid
B. Methanoic acid
C. Tartaric acid
D. Acetic acid
14. The gas that is released when an acid reacts with the metal carbonate is,
- A. Carbon Dioxide
B. Hydrogen
C. Oxygen
D. Nitrogen
15. Two ions produced by CH_3COOH are
- A. CH_3COO^- and H^+
B. CH_3COO^+ and H^-
C. CH_3CO^+ and OH^-
D. CH_3^+ and $COOH^-$
16. The molecular formula of hydronium ion is,
- A. H_2O^-
B. H_3O^+
C. H_2O^+
D. H_3O^-
17. The group of alkali metals is,
- A. Na and K
B. Fe and K
C. Fe and Na
D. Cu and Fe
18. The correct method of diluting acid is,
- A. Adding acid to the water
B. Adding water to the acid
C. Add water to the acid and stir gently
D. Add acid to the water and stir gently.

19. The pH value of rainwater that makes survival of aquatic life difficult is,
- A. Less than 5.6
 - B. Less than 5.8
 - C. Less than 6.1
 - D. Less than 5.9
20. Two fruits that are rich in citric acid are,
- A. Lemon and Tamarind
 - B. Lemon and Orange
 - C. Orange and Tamarind
 - D. Tomato and Tamarind
21. For better dental health and hygiene, the pH value of toothpaste should be,
- A. Less than 4
 - B. More than 6
 - C. More than 7
 - D. Less than 5
22. Upon mixing an acid or base with water, ion concentration,
- A. Increases
 - B. Decreases
 - C. Does not change
 - D. Becomes neutral
23. Two products of neutralization reaction are,
- A. Water and Salt
 - B. Salt and Hydrogen
 - C. Water and hydrogen
 - D. Water and carbon dioxide
24. The pH range of our body is,
- A. 6.0 to 7.8
 - B. 7.0 to 7.6
 - C. 7.0 to 7.7
 - D. 7.0 to 7.8

CHAPTER - 3

Metals and Non-metals

25. A compound having high melting point *
- A. Ionic compound
 - B. Covalent compound
 - C. Carbon compound
 - D. All the above
26. An alloy having constituents of lead and Tin is *
- A. Bronze
 - B. Brass
 - C. Solder
 - D. Stainless steel
27. Alloy of solder is used for welding electrical wires together ,because alloy of solder is *
- A. Good insulator
 - B. Good heat conductor
 - C. High melting point
 - D. Low melting point

28. Amphoteric oxides react with the following reactant gives salt and water as a product *
- A. Metal and non metal B. Acid and base
C. Hydrogen and oxygen D. Metal and base
29. Observe the following stages of extraction of a metal from its ore *
- Sulphide ore \rightarrow \rightarrow Reduction \rightarrow Purifications
- The process that has to be done in the empty spaces is
- A. Electrolysis B. Calcinations
C. Roasting D. Oxidation
30. Copper oxide react with Concentrated hydrochloric acid gives as water and minerals as product , so copper oxide is said to be as *
- A. Acidic oxide B. Basic oxide
C. Neutrals oxide D. Non metal Oxide
31. A balanced chemical equation for the reaction of aluminum metal with steam is *
- A. $3Al + 2H_2O \rightarrow Al_2O_3 + 2H_2$ B. $Al + 3H_2O \rightarrow 2Al_2O_3 + H_2$
C. $2Al + H_2O \rightarrow 3Al_2O_3 + H_2$ D. $2Al + 3H_2O \rightarrow Al_2O_3 + 3H_2$
32. The process used to convert metal carbonate ores in to their oxides is **
- A. Roasting B. Reduction
C. Electrolysis D. Calcinations
33. The atomic number of an element 'X' is 11 , and the atomic number of 'Y' is 17. Then the type of bond formation between these two elements **
- A. Ionic bond B. Covalent bond
C. Hydrogen bond D. Metallic bond
34. Observe the following reactions * *
- $Fe + CuSO_4 \rightarrow FeSO_4 + Cu$ $Zn + FeSO_4 \rightarrow Zn SO_4 + Fe$
- The decreasing order of reactivity of metals in the above reaction is
- A. $Zn > Fe > Cu$ B. $Fe > Cu > Zn$
C. $Zn > Cu > Fe$ D. $Cu > Fe > Zn$
35. A girl observe a blackish layer on a newly brought silver anklets after 2 month .A gas responsible for this reaction is
- A. Carbon dioxide B. Sulphur
C. Oxygen D. Nitrogen dioxide

36. Corrosion of this metal is advantage in it self
- A. Iron
B. Copper
C. Magnesium
D. Aluminum
37. A gas evolved when a metal carbonate react with an acid which extinguish the burning candle
- A. Hydrogen
B. Carbon dioxide
C. Oxygen
D. Nitrogen
38. Aluminum, Copper, Calcium and lead metals when kept in decreasing order of their reactivity are
- A. Al > Pb > Cu > Ca
B. Ca > Al > Pb > Cu
C. Cu > Ca > Al > Pb
D. Pb > Ca > Cu > Al
39. Reaction between X and Y forms a compound Z, 'X' loses electron and 'Y' gains electron. Which of the following properties is not shown by 'Z'
- A. Has high melting point
B. Has low melting point
C. Conduct electricity in molten state
D. Occurs as solid
40. Which of the following pairs will give displacement reactions
- A. NaCl solution and copper metal
B. MgCl₂ solution and aluminum metal
C. FeSO₄ solution and silver metal
D. AgNO₃ solution and copper metal
41. Which of the following methods is suitable for preventing an iron frying from rusting ?
- A. Applying grease
B. Applying paint
C. Applying coating of zinc
D. All of the above
42. An element react with oxygen to give a compound with a high melting point .This compound is also soluble in water. The elements is likely to be
- A. Calcium
B. Carbon
C. Silicon
D. Iron
43. Food can are coated with tin and not with zinc because
- A. Zinc is costlier than tin
B. Zinc has higher melting point than tin
C. Zinc is more reactive than tin
D. Zinc is less reactive than tin
44. A layer formed when magnesium metal is exposed to air is
- A. Magnesium oxide
B. Magnesium carbonates
C. Magnesium sulphide
D. Magnesium nitrite

45. Purpose of concentration of sulphide ore by roasting is
- A. To remove gangue from ores B. To remove water vapors in the ores
C. To convert ore into oxides form D. All the above
46. Thermit process is used in
- A. Join Cracked bones B. Join cracked machinery parts
C. Treatment of teeth D. Concentration of metal
47. From 1 gram gold it is possible to make wire up to 2km length ,here property of metal exhibit is
- A. Good conductor of electricity B. Malleability
C. Ductility D. Sonorous
48. Following active metals preserved under kerosene
- A. Na & K B. K & C
C. Na & Ca D. K & Al
49. For the following alloys related statements which one is wrong?
- A. Low electric conductivity B. Low melting point
C. Properties are different from its constituents D. High electric conductivity

CHAPTER - 4

Carbon and Its Compounds

50. Ethane with molecular formula C_2H_6 has
- A. 6 covalent bonds B. 7 covalent bonds
C. 8 covalent bonds D. 9 covalent bonds
51. Butanone is a four - carbon compound with the functional group
- A. Carboxylic acid B. Aldehyde
C. Ketone D. Alcohol
52. While cooking, if the bottom of the vessel is getting blackened on the outside, it means that
- A. The food is not cooked completely B. The fuel is not burning completely
C. The fuel is wet D. The fuel is burning completely.

53. The hydrocarbon that undergoes addition reaction among the following is *



54. Metallic ions that cause hardness in water

A. Sodium and Potassium

B. Chloride and Bromide

C. Calcium and magnesium

D. Bromine and Iodine

55. Name of the organic compound having molecular formula CH_3CH_2Br is *

A. Bromoethane

B. Chloroethane

C. Ethanone

D. Ethanal

56. Cyclopentane has the molecular formula of C_5H_{10} . It has

A. 5 Covalent bonds

B. 10 Covalent bonds

C. 12 Covalent bonds

D. 15 Covalent bonds

57. Identify the unsaturated compounds in the following. *

i) propane ii) propene iii) propyne iv) Chloropropane

A. i) and ii)

B. ii) and iv)

C. iii) and iv)

D. ii) and iii)

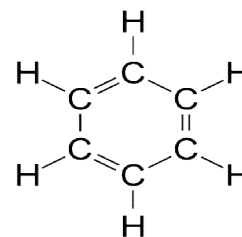
58. The name of this carbon compound *

A. Cyclohexane

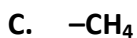
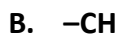
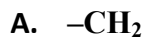
B. Hexene

C. Pentene

D. Benzene



59. Common difference between members of homologous series *



60. Carbon has the unique ability to form bonds with other atoms of carbon, giving rise to large molecules. This property is called*

A. Isomerism

B. Allotropy

C. Catenation

D. Hydrogenation

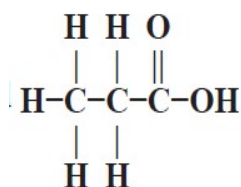
61. Identify the correct equation in the following

- A. $\text{CH}_3\text{CH}_2\text{OH} + 3\text{O}_2 \longrightarrow 2\text{CO}_2 + 3\text{H}_2 + \text{Heat and Light}$
- B. $\text{CH}_3\text{CH}_2\text{OH} + \text{O}_2 \longrightarrow 2\text{CO}_2 + 3\text{H}_2\text{O} + \text{Heat and Light}$
- C. $\text{CH}_3\text{CH}_2\text{OH} + 3\text{O}_2 \longrightarrow 2\text{CO}_2 + 3\text{H}_2\text{O} + \text{Heat and Light}$
- D. $\text{CH}_3\text{CH}_2\text{OH} + 3\text{CO}_2 \longrightarrow 2\text{O}_2 + 3\text{H}_2\text{O} + \text{Heat and Light}$

62. Chlorine reacts with saturated hydrocarbons at room temperature in the

- A. Absence of heat
- B. Presence of light
- C. Presence of acid
- D. Presence of base

63. The functional group present in the carbon compound **



- A. Aldehyde
- B. Alcohol
- C. Ketone
- D. Carboxylic acid

64. The molecular formula of benzene is **

- A. C_5H_{12}
- B. C_6H_{12}
- C. C_6H_6
- D. C_6H_{10}

65. The number of single bonds present in the structure of a cyclohexane molecule **

- A. 12
- B. 18
- C. 24
- D. 6

66. The correct group of saturated hydrocarbon **

- A. $\text{CH}_4, \text{C}_2\text{H}_4, \text{C}_3\text{H}_4$
- B. $\text{C}_2\text{H}_6, \text{C}_3\text{H}_8, \text{C}_4\text{H}_{10}$
- C. $\text{C}_2\text{H}_2, \text{C}_2\text{H}_6, \text{CH}_4$
- D. $\text{C}_2\text{H}_2, \text{C}_3\text{H}_6, \text{C}_4\text{H}_6$

67. The first member of alkene series is

- A. Benzene
- B. Propene
- C. Ethene
- D. Butene

68. Which of the following does not belong to the homologous series
- A. CH_4 B. C_2H_6
 C. C_3H_8 D. C_4H_8
69. The ionic end of soap molecule reacts with
- A. Oil B. Water
 C. Mud D. Colour
70. The minimum number of electrons required to form trivalent bond between two atoms
- A. 4 B. 8
 C. 2 D. 6
71. Molecular formula of methane
- A. CH_4 B. C_2H_6
 C. C_3H_8 D. C_4H_{10}
72. General formula of alkynes
- A. $\text{C}_n\text{H}_{2n+2}$ B. C_nH_{2n}
 C. $\text{C}_n\text{H}_{2n-2}$ D. $\text{C}_n\text{H}_{2n-1}$
73. Property of unsaturated hydrocarbons in the following
- A. Subjected to substitution reaction B. Subjected to addition reaction
 C. Burn with smokeless flame D. Less reactive
74. The compounds having same molecular formula but different structural arrangements are called
- A. Allotropes B. Nonmetals
 C. Isomers D. Isotopes
75. Electron dot structure of Hydrogen is
- A. H:H B. O:O
 C. H::H D. O::O

CHAPTER - 5

Periodic classification of Elements

76. _____ was recognized as a "Father of periodic table"
- A. Newland
B. Dobereiner
C. Mendeleev
D. Moseley
77. In Newlands table _____ elements kept in the same place
- A. Cobalt & Nickel
B. Copper & Nickel
C. Chromium & Nickel
D. Cobalt & Chromium
78. Which element can easily loose electrons
- A. Sodium
B. Flourine
C. Magnesium
D. Aluminium
79. The element with atomic number 18 belongs to
- A. 2nd Period, 8th Group
B. 3rd Period, 8th Group
C. 2nd Period, 18th Group
D. 3rd period, 18th Group
80. If X element belongs to the 13th group then its oxide formula is
- A. XO
B. X₂O₃
C. X₃O₂
D. XO₂
81. A, B, C, D, E elements belongs to 1, 2, 13, 14, 16 groups. Which among these is most electronegative element
- A. A
B. D
C. B
D. E
82. In X element there are 2 shells, it reacts with magnesium and gives MgX compound. If so what is X
- A. Cl
B. B
C. S
D. O
83. In A, B, C elements atomic mass of A is 150, atomic mass of B is 200, then atomic mass of C is _
- A. 350
B. 250
C. 550
D. 275

84. Which of the following is a noble gas element
- A. Na B. Fe
C. Li D. He
85. Of the following pairs, the one containing example of metalloid element in the periodic table is
- A. Sodium & Potassium B. Fluorine & Chlorine
C. Calcium & Magnesium D. Boron & Silicon
86. Which of the following element has smallest size
- A. Carbon B. Magnesium
C. Oxygen D. Sulphur
87. Mendeleev's Periodic table is based on _____
- A. Atomic weight B. Atomic Number
C. Number of Neutrons D. None of these
88. Which of the following pairs have both the members from the same period of the periodic table
- A. Sodium-Calcium B. Sodium-Chlorine
C. Calcium-Chlorine D. Chlorine-Bromine
89. Dobereiner's triad is
- A. Na, K, Rb B. Mg, S, As
C. Cl, Br, I D. P, S, As
90. The last member in each period of the periodic table is
- A. A noble gas element B. A transition element
C. A Halogen D. An alkali metal
91. Which one of the following combination represents a metallic element
- A. 2, 8, 7 B. 2, 8, 8
C. 2, 8, 4 D. 2, 8, 2
92. If the valence shell of an atom of an element has 7 electrons, the element belongs to the group of ____
- A. Alkali metals B. Inert metals
C. Noble gases D. Halogens

93. Which of the following statement is correct
- Sodium atom is larger in size than Potassium atom
 - Sodium atom is larger in size than Lithium atom
 - Chlorine atom is larger in size than sodium atom
 - Aluminum atom is larger in size than sodium atom
94. The element with atomic number 36 belongs to _____ block in the periodic table.
- P
 - D
 - S
 - F
95. On going from right to left , in a period in the periodic table, the metallic characters of the elements
- Increases
 - Decreases
 - Remain unchanged
 - Decreases first then increases
96. Which of the following properties remain unchanged on descending a group in the periodic table
- Atomic size
 - Density
 - Valence electrons
 - Metallic character
97. The elements in the periodic table of A B C D atomic number is 3, 9, 4, 8. The elements of Metallic nature are
- B and D
 - A and B
 - A and C
 - B and C
98. Which of the following gas does not have an eight electrons in the outer shell
- Neon
 - Argon
 - Radon
 - Helium
99. Arrange the following elements Sodium, potassium, Magnesium, and Rubidium in the increasing order of the atomic radius
- $Mg < K < Na < Rb$
 - $Mg < Na < K < Rb$
 - $Mg < Na < Rb < K$
 - $Na < K < Rb < Mg$
100. It was not possible to expand the periodic table after Calcium element. This statement was given after _____ law
- Newlands octet rule
 - Dobereiner triad rule
 - Mendeleev law
 - Moseley law

CHAPTER - 6

Life Processes

101. The tissue that transports food among plants *

A. Xylem

B. Epidermal

C. Phloem

D. Tracheid

102. Oxygen –rich blood flows from *

A. Lungs →Heart → Cells

B. Lungs →Heart → Cells

C. Lungs → Cells → Heart

D. Heart → Cells → Lungs

103. Which of the following are techniques used by plants to get rid of waste materials. *

1. Shedding leaves

2. In the form of resins and gums

2. Excreted into the surrounding soil

4. In cell vacuoles

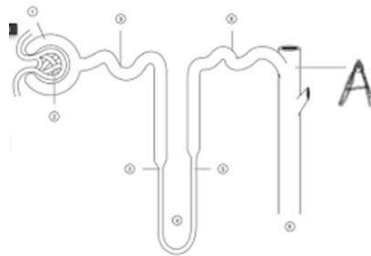
A. 1 and 2 only

B. 1,2 and 3 only

C. 1,3 and 4 only

D. 1, 2, 3 and 4

104. In this diagram of nephron name the part which is marked as "A" *



A. Bowman's capsule

B. Glomerulus

C. Collecting duct

D. Capillaries

105. The process that helps in the absorption of upward movement of water and minerals dissolved in it from roots to the leaves in plants **

A. Respiration

B. Transpiration

C. Photosynthesis

D. Translocation

106. The correct pathway of oxygenated blood coming from lungs to the heart in the human body **
- A. Pulmonary artery → Right Ventricle → Right Atrium
 - B. Pulmonary artery → Right Atrium → Right Ventricle
 - C. Pulmonary Vein → Left Ventricle → Left Atrium
 - D. Pulmonary Vein → Left Atrium → Left Ventricle
107. The blood leaving the tissues becomes rich in
- A. Hemoglobin
 - B. Carbon dioxide
 - C. Water
 - D. Oxygen
108. One cell-thick vessels are called
- A. Arteries
 - B. Veins
 - C. Capillaries
 - D. Pulmonary artery
109. A blood vessel which carries the blood from the heart to the entire body
- A. Artery
 - B. Capillary
 - C. Vein
 - D. Hemoglobin
110. Name a circulatory fluid in the human body other than blood
- A. Platelets
 - B. RBC
 - C. Plasma
 - D. Lymph
111. Chambers present in the heart of birds and mammals
- A. 2
 - B. 3
 - C. 4
 - D. 5
112. Veins have
- A. Thick Wall without Valves
 - B. Thick wall with Valves
 - C. Thin wall without Valves
 - D. Thin wall with Valves
113. The Xylem in plants are responsible for
- A. Transport of water
 - B. Transport of food
 - C. Transport of amino acids
 - D. Transport of oxygen

114. Lymph is
- | | |
|--|--|
| A. Colourless and contains less protein | B. Colourless and contains more protein |
| C. Red colour and contains less protein | D. Red colour and contains more protein |
115. The loss of water in the form of vapour from the aerial parts of the plant is known as
- | | |
|--------------------------|--------------------------|
| A. Photosynthesis | B. Transpiration |
| C. Translocation | D. Transportation |
116. The transport of soluble products of photosynthesis is called as
- | | |
|--------------------------|--------------------------|
| A. Photosynthesis | B. Transpiration |
| C. Translocation | D. Transportation |
117. Function of Blood
- | | |
|---------------------------|-----------------------------|
| 1. Transportation of food | 2. Transportation of Oxygen |
| 3. Urine Formation | 4. Transportation of Wastes |
- | | |
|--------------------------|--------------------------|
| A. 1 only | B. 1 and 2 only |
| C. 1,2 and 3 only | D. 1,2 and 4 only |
118. The Kidneys in human beings are a part of the system for
- | | |
|---------------------|--------------------------|
| A. Nutrition | B. Respiration |
| C. Excretion | D. Transportation |
119. Vena Cava from upper part and lower part of the body carry blood from
- | | |
|-------------------------------|-------------------------------|
| A. Heart to Body Cells | B. Body Cells to Heart |
| C. Heart to Lungs | D. Lungs to Heart |
120. In this diagram of human heart name the parts showing 1 and 2

- | |
|--|
| A. 1→Right Atrium and 2→ Left Ventricle |
| B. 1→Right Ventricle and 2→ Left Atrium |
| C. 1→Left Atrium and 2→ Right Ventricle |
| D. 1→Left Ventricle and 2→ Right Atrium |



121. The unit helps in clotting of blood is
- A. RBC
 - B. WBC
 - C. Platelets
 - D. Plasma

122. Which of the following has a three – chambered heart
- A. Crow
 - B. Lizard
 - C. Fish
 - D. Tiger

CHAPTER - 7

Control and Coordination

123. The pattern of response in the roots of plants is *
- A. Directional and negatively phototropic
 - B. Positively phototropic and negatively geotropic
 - C. Non directional and positively geotropic
 - D. Growth dependent and positively hydrotropic
124. Neck region of a person has bulged with less metabolic activity ,the gland responsible for such Problem *
- A. Thyroid
 - B. Adrenal
 - C. Pancreas
 - D. Pituitary
125. Iodized salt usage is to overcome this problem *
- A. Problem in Genitals
 - B. Thyroid problem
 - C. Adrenal problem
 - D. Pancreatic problem
126. Voluntary activities are controlled by this part of the brain *
- A. Hindbrain
 - B. Hypothalamus
 - C. Cerebellum
 - D. Spinal Chord
127. Hormone in highest proportion in Fruits and Seeds *
- A. Gibberellin
 - B. Cytokinin
 - C. Auxin
 - D. Absissic acid

128. Plant grows longer in the shade region because of this hormone *
- | | |
|-----------------------|-------------------------|
| A. Auxin | B. Absissic acid |
| C. Gibberellin | D. Cytokinin |
129. Involuntary functions are controlled by *
- | | |
|----------------------|--------------------|
| A. Cerebellum | B. Cerebrum |
| C. Medulla | D. Skull |
130. The hormone increases blood flow ,heart beat and makes ready to the situation is *
- | | |
|---------------------|----------------------|
| A. Thyroxin | B. Adrenaline |
| C. Oestrogen | D. Insulin |
131. The hormone that regulates carbohydrate, protein and fat metabolism in the human body is **
- | | |
|------------------------|----------------------|
| A. Testosterone | B. Adrenaline |
| C. Thyroxin | D. Insulin |
132. The mismatched pair among the following is **
- | | |
|--------------------------------------|-----------------------------------|
| A. Adrenaline-Pituitary gland | B. Testosterone-Testis |
| C. Insulin-Pancreas | D. Thyroxin –Thyroid gland |
133. The part of human brain responsible for precision of voluntary actions and maintaining the posture and balance of the body **
- | | |
|------------------------|----------------------|
| A. Pons | B. Cerebrum |
| C. Hypothalamus | D. Cerebellum |
134. The function of Hindbrain is
- | | |
|--------------------|--------------------|
| A. Thinking | B. Hunger |
| C. Sight | D. Movement |
135. Part of the brain responsible for Thinking is
- | | |
|----------------------|-----------------------------|
| A. Cerebrum | B. Hypothalamus |
| C. Hind brain | D. Medulla Oblongata |
136. Function of Hypothalamus is
- | | |
|--------------------|--------------------|
| A. Sleep | B. Hearing |
| C. Thinking | D. Movement |

137. Part of the brain controls Breathing is
- A. Cerebrum
 - B. Cerebellum
 - C. Pons
 - D. Medulla Oblongata
138. Parts of reflex arc in order is
- A. Receptor-Sensory neuron –Relay neuron-Motor neuron-Effector
 - B. Sensory neuron- Receptor- –Relay neuron-Motor neuron-Effector
 - C. Sensory neuron –Relay neuron-Motor neuron-Effector- Receptor
 - D. Sensory neuron –Relay neuron- Receptor-Motor neuron-Effector
139. Parts of reflex arc shows the action is
- A. Receptor
 - B. Sensory neuron
 - C. Relay neuron
 - D. Effector
140. Junction between two nerves
- A. Axon
 - B. Synapse
 - C. Dendrite
 - D. Impulse
141. Reflex action is controlled by
- A. Cerebrum
 - B. Cerebellum
 - C. Pons
 - D. Medulla Oblongata
142. Functional unit of nervous system is
- A. Axon
 - B. Nephron
 - C. Neuron
 - D. Synapse
143. Movement of shoot tip of Hibiscus towards light is
- A. Phototropism
 - B. Geotropism
 - C. Hydrotropism
 - D. Chemotropism
144. The process of growth of pollen tube towards ovum is
- A. Hydrotropism
 - B. Chemotropism
 - C. Phototropism
 - D. Geotropism

145. Gigantism is occurred because of deficiency of this hormone
- A. Thyroid** **B. Adrenal**
C. Thymus **D. Pituitary**
146. Pituitary is stimulated to secrete hormones by
- A. Hypothalamus** **B. Cerebellum**
C. Pons **D. Medulla Oblongata**
147. One person is having slow recovery from wounds because of more sugar level in blood, the hormone responsible for this problem is secreted by
- A. Thyroid** **B. Adrenal**
C. Pancreas **D. Pituitary**
148. Peripheral nervous system has the following parts
- A. Cranial Nerves** **B. Spinal nerves**
C. Brain and Spinal Cord **D. Cranial and Spinal nerves**
149. Master gland of glandular system
- A. Adrenal** **B. Thyroid**
C. Pituitary **D. Parathyroid**
150. Simultaneous reaction to a stimulus by the body is
- A. Reflex action** **B. Reflex arc**
C. Action to the stimulus **D. Stimulate**
151. Root moves towards the soil on earth ,this movement is known as
- A. Phototropism** **B. Geotropism**
C. Hydrotropism **D. Chemotropism**
152. Movement of the plant not showing growth is
- A. Ridge Gourds Tendril growth**
B. Touch me not plant leaves drooping
C. Arecanuttree growth towards sun
D. Coconut tree Root growth towards soil

153. Hormone inhibits the growth of plant is
- | | |
|-----------------------|-------------------------|
| A. Gibberellin | B. Cytokinin |
| C. Auxin | D. Absissic acid |
154. Hormone developing maleness at maturity is
- | | |
|------------------------|--------------------|
| A. Testosterone | B. Insulin |
| C. Progesterone | D. Thyroxin |
155. Hormone developing femaleness at maturity is
- | | |
|------------------------|------------------------|
| A. Adrenaline | B. Thyroxin |
| C. Progesterone | D. Testosterone |
156. Hormones secreted by Pancreas are
- | | |
|--------------------------------|-------------------------------|
| A. Adrenaline –Thyroxin | B. Adrenaline –Insulin |
| C. Insulin –Glucagon | D. Thyroxine -Glucagon |
157. Route of Impulse movement through nerve is
- | |
|---|
| A. Dendrite-Axon –Cellbody-Nerve ending |
| B. Axon –Cellbody-Nerve ending -Dendrite |
| C. Axon –Dendrite-Cellbody-Nerve ending |
| D. Dendrite- Cellbody-Axon –Nerve ending |

CHAPTER - 8

How do Organisms Reproduce?

158. Reproductive cells contain only one copy of chromosomes in it, because of that **
- | |
|--|
| A. Hereditary traits are transferred to generation |
| B. Keeps constant number of chromosomes in the generation |
| C. Makes changes in the hereditary traits in the generation |
| D. Transfers one copy of the chromosomes to the generation |
159. This part of the flower which develops into fruit is **
- | | |
|------------------|-----------------|
| A. Ovule | B. Ovary |
| C. Stigma | D. Style |

160. The organ that secretes the hormone which controls the Body changes in puberty in males is **
- A. Prostate gland
 B. Scrotum
 C. Seminal vesicle
 D. Testis
161. Which structure among the following connects the foetus to the mother's blood? **
- A. Fallopian tube
 B. Uterus
 C. Placenta
 D. Ovary
162. The part of the male reproductive system which produces the liquid that nourish and helps in the movement of the sperms is, **
- A. Testis
 B. Prostate gland
 C. Ureter
 D. Bladder
163. Egg \xrightarrow{A} Zygote \xrightarrow{B} Embryo \longrightarrow Foetus In this process A and B represents **
- A. Fertilization and Division
 B. Division and Pollination
 C. Fertilization and Pollination
 D. Division and Fertilization
164. The process that does not happen if the egg is fertilized **
- A. The embryo is implanted in the lining of the uterus
 B. Zygote starts dividing
 C. Grows and develops organs to become foetus
 D. Menstruation cycle continues
165. This among the following is not a part of the female reproductive system **
- A. Ovary
 B. Uterus
 C. Vas deferens
 D. Fallopian tube
166. The correct sequence found in the process of sexual reproduction in the flower is *
- A. Pollination, fertilization, embryo, seed
 B. Seed, embryo, fertilization, pollination
 C. Embryo, seed, pollination, fertilization
 D. Pollination, fertilization, seed, embryo
167. The part of the seed that grows and develops into root on germination is, *
- A. Cotyledon
 B. Plumule
 C. Radicle
 D. Seed coat

168. Sexually transmitting disease caused by the bacteria among the following is, *
- | | |
|------------------------------|-----------------------------------|
| A. Syphilis and Warts | B. Warts and Gonorrhoea |
| C. Warts and AIDS | D. Gonorrhoea and Syphilis |
169. The parts which included in the female part of the flower
- | | | | |
|--------------------------|---------------------------|----------|----------|
| 1. Pistil | 2. Pollen grain | 3. Ovary | 4. Style |
| A. 1,3 and 4 only | B. 1,2 and 3 only | | |
| C. 1 and 4 only | D. 1,2,3 and 4 all | | |
170. If the egg released from the ovary is not fertilized, then
- | |
|---|
| A. Implanted in the lining of the uterus |
| B. Release of egg is stopped |
| C. Menstruation is continued |
| D. Develops into embryo |
171. The Best Contraceptive method that can prevent sexually transmitting Diseases
- | | |
|---------------------------|-------------------------------|
| A. Use of Copper T | B. Contraceptive pills |
| C. Use of Condoms | D. Surgery method |
172. This of the following contraceptive method can bring the hormonal changes in the body
- | | |
|-------------------------------|--------------------------|
| A. Contraceptive pills | B. Use of Condoms |
| C. Use of Copper T | D. Surgery method |
173. The function of the ovary among the following is
- | | |
|---|---------------------------------------|
| 1. Production of eggs | 2. Secretion of Oestrogen |
| 3. Transfer of fertilized egg into uterus | 4. Helps in the development of foetus |
| A. 1 and 2 only | B. 1 and 3 only |
| C. 2 and 4 only | D. 3 and 4 only |
174. The part that consists the male gametes in the flower is
- | | |
|------------------|--------------------|
| A. Ovary | B. Anther |
| C. Stigma | D. Filament |

175. The body changes that is not takes place in the male during the puberty;
- A. Voices begin to crack**
 - B. Thick hair growth in armpits and genital area**
 - C. Begin to develop pimples in the face**
 - D. Growth of new teeth replacing milk teeth**
176. The organ in female reproductive system which prepares itself every month to receive and nurture the growing embryo is,
- A. Ovary**
 - B. Uterus**
 - C. Fallopian tube**
 - D. Vagina**
177. In human males the testes lie in the scrotum outside the body because for the production of sperms
- A. Needs low temperature**
 - B. Needs more nutrition**
 - C. Needs more temperature**
 - D. For more blood supply**
178. This plant among the following produces the flower having both stamen and pistil
- A. Watermelon**
 - B. Mustard**
 - C. Papaya**
 - D. Ash guard**
179. If the pollen of one flower transfers to the stigma of the same flower then that process is referred as
- A. Fertilization**
 - B. Cross pollination**
 - C. Self-pollination**
 - D. Reproduction**
180. Anther consists of the following structure
- A. Sepals**
 - B. Ovules**
 - C. Stigma**
 - D. Pollen grains**
181. These among the following transmits by the sexual contacts
- A. Hepatitis**
 - B. Filariasis**
 - C. Typhoid**
 - D. Syphilis**
182. These among the following is not a changes that happen after fertilization in flower
- A. Development of foetus from zygote**
 - B. Fertilized egg converts into seed**
 - C. Formation of Pollen tube**
 - D. Petal sepalstamen and stigma shrivel and fall off**

CHAPTER - 9

Heredity and Evolution

183. Having two sets of genes in the germs cells is not possible” in order to, *
- A. Sexual reproduction
 - B. Ensure the stability of the DNA of the species
 - C. Multiply the number of chromosomes
 - D. Ensure instability of the DNA
184. Genetic drift and natural selection, together result in the formation of new species of organisms. The reason is, *
- A. Variations
 - B. Survival
 - C. Similarities
 - D. Genes
185. Studies of anatomical structures are helpful for tracing evolutionary relationships due to *
- A. Similarities
 - B. Variations
 - C. Similarities and Variations
 - D. Anatomical structures
186. The factors that could determine” the birds are very closely related to reptiles,” *
- A. Limbs
 - B. Habitat
 - C. Food
 - D. Feathers
187. The expressions of ‘Tall’ or ‘Short’ traits in plants controlled by the genes are due to *
- A. Secretion of hormones
 - B. Heredity
 - C. Nutrition
 - D. Nature of Soil
188. ”Acquired traits of an individual organism during its life time cannot direct the evolution” because acquired traits, *
- A. Can be inherited
 - B. Cannot be inherited
 - C. Are different
 - D. Are same

189. "The traits of an organism independently inherit to the progeny"- Mendel's monohybrid cross experiments was clarified by *
- A. Getting independently assorted plants with new combination
 - B. Comparing the progeny with the host plants
 - C. Getting the ratio of 3:1
 - D. Hybridizing two plants for a single traits
190. Analogous organs have, **
- A. Same structure and same function
 - B. Same structure and different functions.
 - C. Different structures and same function.
 - D. Different structures and different functions
191. " The experiences of an individual during its life time cannot be passed on to its progeny," because they are **
- A. Inherited traits
 - B. Acquired traits
 - C. Dominant traits
 - D. Recessive traits
192. If a round green seeded pea plant (RRyy) is crossed with wrinkled yellow seeded pea plant (rrYY) the seeds produced in F₁ generation are **
- A. Round and Green
 - B. Wrinkled and Yellow
 - C. Wrinkled and Green
 - D. Round and Yellow
193. Homologous organs have
- A. Same structure and same function
 - B. Same structure and different functions.
 - C. Different structures and same function.
 - D. Different structures and different functions
194. The copies of genes for the same trait and if the copies are not identical, the trait that gets expressed and the other one remains unexpressed are called respectively,
- A. Dominant and Recessive
 - B. Recessive and Dominant
 - C. Dominant traits
 - D. Recessive traits

195. In human beings, the paternal chromosome determines the sex of the child in this way
- A. X-Boy
 - B. Y-Girl
 - C. X-Girl
 - D. Y- Boy and Girl
196. Speciation may take place when variation is combined with
- A. Natural selection
 - B. Geographical isolation
 - C. Genetic drift
 - D. Sexual reproduction
197. A Mendelian experiment consisted of breeding tall pea plants bearing violet flowers with short pea plants bearing white flowers. The progeny will bore violet flowers, but almost half of them were short. This suggests that, the genetic make-up of the tall parent can be depicted as
- A. TTWW
 - B. TTww
 - C. TtWW
 - D. TtWw
198. An example of homologous organs is
- A. Our arm and a dog's fore-leg
 - B. Our teeth and elephant tusks
 - C. Wings of butterfly and wings of bat
 - D. A and B only
199. In evolutionary terms, we have more in common with
- A. A chinese school- boy
 - B. A chimpanzee
 - C. A spider
 - D. A bacterium
200. Accidents in small populations can change the frequency of some genes which provide diversity without any adaptations
- A. Speciation
 - B. Natural selection
 - C. Genetic drift
 - D. Variations
201. In Mendel's experiments monohybrid ratio in F_2 progeny is
- A. 3:1
 - B. 9:3:3:1
 - C. 2:1
 - D. 9:3:1
202. In Mendel's experiments di-hybrid ratio in F_2 progeny is
- A. 3:1
 - B. 9:3:3:1
 - C. 2:1
 - D. 9:3:1

CHAPTER - 10

Light- Reflection and Refraction

203. The suitable focal length of the convex lens used as magnifying lens to read "Hallmark 916" written on ornament is: *

- A. 12cm
B. 60cm
C. 100cm
D. 120cm

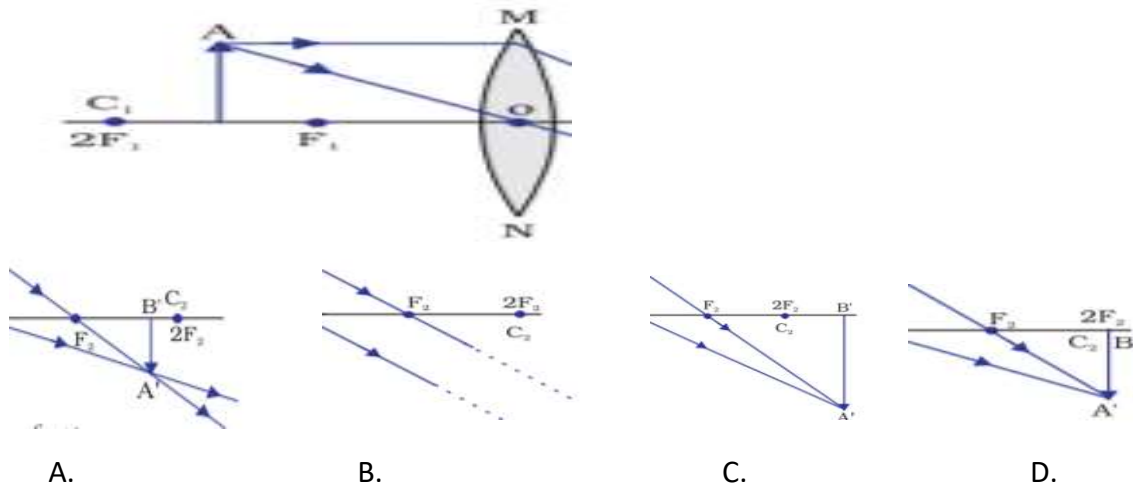
204. If the radius of curvature of a lens is 30cm, then its focal length will be *

- A. 60cm
B. 30cm
C. 15cm
D. 120cm

205. Refraction of light takes place, when the *

- A. Angle of incidence is more than 90°
B. Angle of incidence is less than 90°
C. Angle of incidence is 0°
D. Mediums having same refractive index.

206. Complete the ray diagram using the correct option *



207. The focal length of a convex lens is 100cm then its power will be *

- A. +1D
B. -1D
C. +0.01D
D. -0.01D

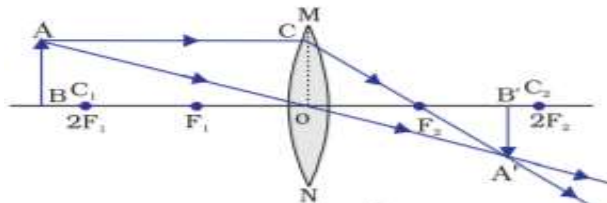
208. An object is kept at a distance of 30cm from a diverging lens of focal length 15cm, then the image distance and its magnification will be respectively *

- A. -10 cm and 3
B. +10cm and 3
C. +10 cm and 0.33
D. -10 cm and 0.33

209. Concave lens always produces *

- A. erect, diminished and real image
- B. inverted, diminished and real image
- C. erect, enlarged and virtual image
- D. erect, diminished and virtual image.

210. From the ray diagram given below identify the position and nature of the image *



- A. Between F₂ and 2F₂, virtual and inverted
- B. Between F₂ and 2F₂, real and inverted.
- C. Beyond 2F₂, real and inverted.
- D. Beyond 2F₂, virtual and erect.

211. The refractive index of glass is 1.5 means, *

- A. The ratio of the speed of light in water and the speed of light in glass equal to 1.5.
- B. The product of the speed of light in water and the speed of light in glass equal to 1.5.
- C. The product of the speed of light in air and the speed of light in glass equal to 1.5.
- D. The ratio of the speed of light in air and the speed of light in glass equal to 1.5.

212. A concave lens of focal length 15cm forms an image 10cm from the lens. The nature of the image is, *

- A. Real and erect
- B. Virtual and erect
- C. Virtual and inverted
- D. Real and inverted

213. A doctor prescribes a corrective lens of power -0.5D to a person. The focal length of the lens and type is **

- A. -2m and concave lens
- B. +2 m and convex lens
- C. +2m and concave lens
- D. -2m and convex lens

214. The nature and the size of the image formed when the object is kept between the principal focus 'F₁' and optical centre 'O' of a convex lens is **

- A. Virtual, erect and enlarged
- B. Real, inverted and small size
- C. Virtual, inverted and small size
- D. Real, inverted and enlarged

215. The diameter of the circular outline of a spherical lens is, **
- A. Optical centre** **B. Centre of curvature**
C. Aperture **D. Principal axis**
216. Object distance and image distance of a lens are - 60cm and -20cm respectively, then the magnification of the lens will be **
- A. -0.33** **B. +3.0**
C. +0.33 **D. +4.0**
217. Which one of the following materials cannot be used to make a lens?
- A. Water** **B. Glass**
C. Plastic **D. Clay**
218. Where should an object be placed in front of a convex lens to get a real image of the size of the Object
- A. At the principal focus of the lens**
B. At twice the focal length
C. At infinity
D. Between the optical centre of the lens and its principal focus
219. Which of the following lenses would you prefer to use while reading small letters found in a dictionary?
- A. A convex lens of focal length 50cm**
B. A concave lens of focal length 50cm
C. A convex lens of focal length 5cm
D. A concave lens of focal length 5cm
220. The centre point of a lens is called as
- A. Optical centre** **B. Centre of curvature**
C. Focal point **D. Aperture**
221. A Ray of light passing through a principal focus, after refraction from a convex lens will emerge
- A. Through the principal focus on the same side of the lens.**
B. Through the principal focus on the other side of the lens.
C. Parallel to the principal axis.
D. Without deviation.

222. 1 diopter is a power of a lens whose focal length is
- A. 1cm** **B. 50cm**
C. 1m **D. 50m**
223. The positive sign in the value of magnification of a lens shows that the image is
- A. erect and real** **B. erect and virtual**
C. inverted and real **D. inverted and virtual**
224. The lens formula is expressed as
- A. $\frac{1}{v} - \frac{1}{u} = \frac{1}{f}$** **B. $\frac{1}{u} - \frac{1}{v} = \frac{1}{f}$**
C. $\frac{1}{v} + \frac{1}{u} = \frac{1}{f}$ **D. $\frac{1}{h} - \frac{1}{u} = \frac{1}{f}$**
225. Light rays from the sun light falling on a convex lens will converge at a point on principal axis called
- A. Radius of curvature** **B. Centre of curvature**
C. Optic centre **D. Principal focus**
226. A highly enlarged and real image is formed by a convex lens when an object is placed
- A. between F_1 and O** **B. at $2F_1$**
C. at F_1 **D. between F_2 and $2F_2$**
227. A Ray of light is travelling from a rarer medium to a denser medium. While entering the denser medium at the point of incidence, it
- A. Goes straight into the second medium** **B. Bends towards the normal**
C. Bends away from the normal **D. Does not enter at all**

CHAPTER - 12

Electricity

228. Advice used to change the resistance in an electric circuit is **
- A. Ammeter** **B. Rheostat**
C. Galvanometer **D. Voltmeter**

229. The potential difference between the terminals of electric heater is 60V, when it draws a current of 4A from the source. The resistance of electric heater coil is **

- A. 15Ω
- B. 240Ω
- C. 24Ω
- D. 64Ω

230. The resistance of a conductor does NOT depend on **

- A. Length of conductor
- B. Area of cross section of conductor
- C. Magnetic nature
- D. Nature of the material

231. 'WATT' is an SI unit of **

- A. Electric current
- B. Electric charge
- C. Electric potential difference
- D. Electric power

232. Observe the following table **

Material	Resistivity(Ωm)
K	6.84×10^{-8}
L	1.62×10^{-8}
M	5.20×10^{-8}
N	2.63×10^{-8}

Good conductor of electricity among these materials is

- A. K
- B. L
- C. M
- D. N

233. SI Unit of electric charge is _____ *

- A. Joule
- B. Volt
- C. Coulomb
- D. Ampere

234. The opposition to flow of electric current is called _____ *

- A. Volt
- B. Electric current
- C. Resistance
- D. Ampere

235. The formula of Joule's law of heating is _____ *

- A. $V=RI$
- B. $H=IRT$
- C. $H=I^2R^2T$
- D. $H=I^2RT$

243. Copper and Aluminum wires usually employed for electricity transmission because copper and Aluminum wires are having --

- A. Low resistivity and bad conductors of electricity
- B. High resistivity and bad conductors of electricity
- C. High resistivity and good conductors of electricity
- D. Low resistivity and good conductors of electricity



In an electric circuit these symbols are represents _____

- A. Ammeter,voltmeter, switch closed,switch open
- B. Voltmeter,ammeter, switch closed,switch open
- C. Switch open,ammeter,voltmeter,switch closed
- D. Switch closed,ammeter, voltmeter,switch open

245. A continuous and closed path of an electric current is called _____

- A. Electric circuit
- B. Electric connection
- C. Electric power
- D. Electric distribution.

246. An electric bulb is connected to a 220 V generator. The current flowing in the bulb is 0.50A Then the power of the bulb is _____

- A. 1100W
- B. 44W
- C. 110W
- D. 100W

247. The amount of current will an electric heater coil draw from a 220 V source,if the resistance of the heater coil is 100 ohm _____

- A. 220A
- B. 22 A
- C. 2.2 A
- D. 220V

248. Precautionary measures taken to prevent overload in a circuit is _____

- A. Many appliances are connected to a single socket
- B. Many appliances are connected to a different socket.
- C. Many appliances are not used at a time
- D. Both B and C are correct

249. The work done to move a unit charge from one point to other is _____
- A. Electric current** **B. Potential difference**
C. Electric power **D. Electric resistance**
250. The resistance of a conductor is 27 ohm , if it is cut in to three equal parts and connected it in parallel . Then the resultant resistance will be _____
- A. 1 ohm** **B. 3 ohm**
C. 9 ohm **D. 12 ohm**
251. The work done in moving a charge of 2C across two points at potential difference 12V _____
- A. 24J** **B. 6J**
C. 14J **D. 10J**
252. The resistance of a uniform metallic conductor is _____
- A. Directly proportion to its length** **B. Inversely proportional to its length**
C. Equal to its length **D. Multiple of its length**
253. The instrument used to maintain potential difference across the conductor is _____
- A. Pencil** **B. Conductor**
C. Battery **D. Water**
254. Instrument used to measure electric current is _____
- A. Resistor** **B. Ammeter**
C. Voltmeter **D. Water**
255. Instrument used to measure potential difference in an electric circuit is--
- A. Voltmeter** **B. Ammeter**
C. Voltmeter **D. Rheostat**
256. In an electric circuit ammeter is connected in _____
- A. Parallel** **B. Series**
C. Both parallel and series **D. Opposite direction**

257. In an electric circuit voltmeter is connected in_____
- A. Parallel** **B. Series**
C. Both parallel and series **D. Opposite direction**
258. The benefits of connecting parallel series in an electric circuit is—
- A. By dividing electric current total resistance become less a in circuit**
B. By dividing electric current total resistance become more in a circuit
C. If one appliance is not working then all other appliances will not stop working
D. Option both A and C correct
259. If a current of 0.5A is drawn by a filament of an electric bulb for 10 minutes ,then the amount of electric charge that flows through the circuit is—
- A. 50C** **B. 5C**
C. 300C **D. 30C**
260. Formula of ohms law
- A. $V=IT$** **B. $H=IRT$**
C. $V=RI$ **D. $H=I^2RT$**
261. SI unit of resistivity –
- A. Ohm** **B. Watt**
C. Ohm meter **D. Ampere**
262. To prolong the life of the filament of an electric bulb ,the gas filled in the bulb is --
- A. Oxygen** **B. Carbon dioxide**
C. Hydrogen **D. Nitrogen**

CHAPTER - 13

Magnetic Effects of Electric current

263. The magnetic field lines inside a solenoid are in the form of a parallel Straight lines. The reason for this is the magnetic field inside the solenoid is: *
- A. Very high** **B. Uniform**
C. Zero **D. Produced by electricity.**

264. Which of the following is not a property of magnetic lines? *
- A. **Magnetic field lines dense near poles**
 - B. **Magnetic field lines are closed loops.**
 - C. **Magnetic field lines intersect each other**
 - D. **Magnetic field lines emerge from North Pole and merge at South Pole**
265. The correct way of using electrical appliances in domestic electric circuit is *
- A. **Connecting electrical appliances in series**
 - B. **Using an electrical appliance of 880 W power in 5A electric circuit**
 - C. **Connecting main fuse to electrical appliances in parallel**
 - D. **Using an electrical appliance of 2KW power in 5A electric circuit**
266. A convenient way of finding the direction of magnetic field associated with the current carrying straight conductor is given by *
- A. **Right hand thumb rule**
 - B. **Fleming's right hand rule**
 - C. **Fleming's left hand rule**
 - D. **Jules law**
267. The working principle of an electric motor *
- A. **A current carrying conductor when placed in a magnetic field experiences a force**
 - B. **Electrochemical effect**
 - C. **Electromagnetic effect**
 - D. **Electromagnetic induction**
268. In Fleming's left hand rule middle finger indicates the direction of the **
- A. **Magnetic field**
 - B. **Electric current induced in conductor**
 - C. **Electric current**
 - D. **Movement of the conductor**
269. The function of electric generator is, it **
- A. **Reverses the direction of current**
 - B. **Converts electric energy into mechanical energy**
 - C. **Detects presence of electric current in the circuit**
 - D. **Converts mechanical energy into electrical energy**
270. The principle on which an electric generator works **
- A. **Electrochemical effect**
 - B. **Electromagnetic effect**
 - C. **Electromagnetic Induction**
 - D. **Electro heating effect**

271. In faraday's coil and magnet experiment when coil and magnet are both stationary
- A. Coil produces more electricity**
 - B. Coil produces electricity**
 - C. Electricity continuously changes in the coil**
 - D. There is no flow of electricity in the coil.**
272. The device used to detect the flow of electric current in faraday's coil and magnet experiment
- A. Voltmeter**
 - B. Ammeter**
 - C. Galvanometer**
 - D. Tester**
273. Which of the following correctly describes the magnetic field near a long straight conductor?
- A. The field consists of straight lines perpendicular to the wire.**
 - B. The field consists of straight lines parallel to the wire.**
 - C. The field consists of radial lines originating from the wire.**
 - D. The field consists of concentric circles centered on the wire.**
274. The phenomenon of electromagnetic induction is
- A. The process of charging a body.**
 - B. The process of generating magnetic field due to current passing through coil.**
 - C. Producing induced current in a coil due to relative motion between a magnet and the coil.**
 - D. The process of rotating a coil of an electric motor**
275. A device that reverses the direction of flow of current through a circuit is called a
- A. Split ring**
 - B. Commutator**
 - C. Slip ring**
 - D. Brushes**
276. During short circuit current in the circuit
- A. Reduces substantially**
 - B. Does not change**
 - C. Increases heavily**
 - D. Vary continuously**
277. State a false statement among the following
- A. An electric motor converts mechanical energy into electrical energy**
 - B. An electric motor converts electric energy into mechanical energy.**
 - C. When current carrying conductor is placed in magnetic it experiences mechanical force**
 - D. Electric motor is used in appliances like fan mixer etc.**
278. The device used to get electrical energy from mechanical energy
- A. Dynamo**
 - B. Galvanometer**
 - C. Ammeter**
 - D. Volta meter**

279. The frequency of alternating current produced in India is
- A. 100 Hertz
 - B. 220 Hertz
 - C. 110 Hertz
 - D. 50 Hertz
280. The safety device used to protect electrical appliances in a domestic circuit during overloading of the circuits
- A. Fuse
 - B. Volt meter
 - C. Ammeter
 - D. Tester
281. In India the potential difference between live wire and neutral wire is
- A. 220V
 - B. 100V
 - C. 110V
 - D. 50V
282. To get maximum mechanical force in an electric motor the angle between direction of current and the direction of magnetic field should be
- A. 0 degree
 - B. 45 degree
 - C. 90 degree
 - D. 180 degree
283. In domestic electric circuits the colour of live wire is
- A. Green
 - B. Blue
 - C. Red
 - D. Black
284. The first scientist to show that the magnetic field can create the flow of electric current
- A. Ohm
 - B. Michael Faraday
 - C. Oersted
 - D. Isaac Newton
285. Magnetic field has
- A. It doesn't have direction and magnitude
 - B. It has no direction but magnitude is present
 - C. It has both direction and magnitude
 - D. It doesn't have direction and magnitude
286. In Fleming's right hand rule middle finger indicates the direction of the
- A. Magnetic field
 - B. Electric current induced in conductor
 - C. Electric current
 - D. Movement of the conductor

287. Which of the following property can change while it moves freely in a magnetic field?

- A. Velocity
- B. Momentum
- C. Mass
- D. A&B

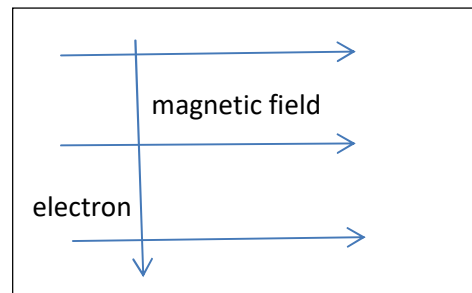
288. A rectangular coil of copper wires is rotated in a magnetic field. The direction of the induced Current changes once in each

- A. Two revolutions
- B. One revolution
- C. Half revolution
- D. One fourth revolution

289. An electrons enters a magnetic field at right angles to it as shown in the fig.

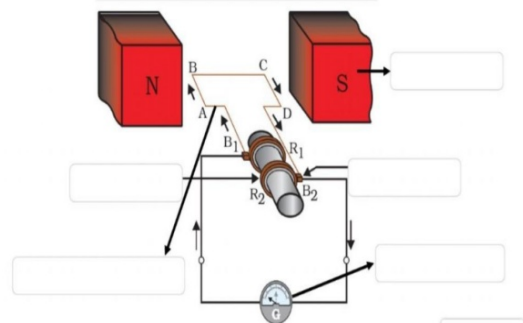
The direction of force acting on the Electron will be

- A. To the right
- B. To the left
- C. Out of the page
- D. Into the page



290. In this diagram R1, R2 and B1,B2 are respectively

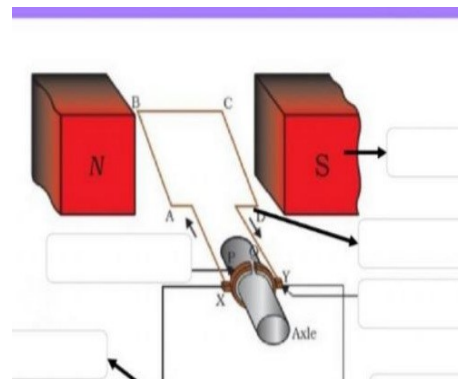
- A. Rings & brushes
- B. Rings & magnetic poles
- C. Brushes & magnetic poles
- D. Brushes & rings



Based on the given diagram answer question number 291 and 292

291. In the diagram name P, Q

- A. Brushes
- B. Split rings
- C. Complete rings
- D. Magnetic poles



292. The above device is used in

A. Mixer

B. Fan

C. Toy car

D. Washing machine

CHAPTER - 14

Sources of Energy

293. In a Power station coal is burnt to heat water to produce steam which further runs the turbine to Generate electricity. This power station is_____*

A. Thermal Power Plant because coal is burnt

B. Hydro power plant because water is heated

C. Nuclear Power plant because turbine runs

D. Bio gas power plant because coal is used

294. Identify the correct statement in relation to energy sources_____

A. Efficiency should be high

B. Should produce high smoke

C. Should be easily available

D. Should be rarely available

A. A&B

B. A&C

C. B&D

D. C&D

295. Which of the following energy sources is affected by moon's gravity? *

A. Solar energy

B. Fossil fuels

C. Tidal energy

D. Biomass

296. The energy possessed by huge waves needed to generate electricity is_____*

A. Solar energy

B. Kinetic energy

C. Potential energy

D. Heat energy

297. Which of the following is not a fossil fuel? *

A. LPG

B. Natural gas

C. Biogas

D. CNG

298. A solar water heater cannot be used to get hot water on _____ *
- A. A sunny day
B. A cloudy day
C. A hot day
D. A windy day
299. Most of the stored sources of energy we use represent stored solar energy. Which of the following is not ultimately derived from the Sun's energy? *
- A. Geothermal energy
B. Wind energy
C. Nuclear energy
D. Biomass
300. Hot Springs are related to _____ *
- A. Geothermal energy
B. Nuclear energy
C. Tidal energy
D. Wind energy
301. The common fuel used in Thermal power plant is _____ *
- A. Methane
B. Hydrogen
C. Coal
D. Kerosene
302. The oxides of carbon, nitrogen and sulphur that are released on burning fossil fuels are _____
- A. Basic oxides
B. Amphoteric oxides
C. Acidic Oxides
D. Neutral oxides
303. The vegetation which is submerged rots under anaerobic conditions and give rise to large amounts of methane. This problem is associated with _____
- A. By constructing Thermal power plant
B. By constructing Dams for Hydro Power Plants
C. By constructing nuclear power plants
D. While setting wind mills to harness wind energy
304. The power (electricity) produced by a typical solar cell when exposed to the sun _____
- A. 1 watt
B. 0.5 watt
C. 0.7 watt
D. 0.9 watt
305. The element used for making solar cells is _____
- A. Sulphur
B. Phosphorous
C. Zirconium
D. Silicon

306. The voltage produced by a typical solar cell when exposed to the sun_____
- | | |
|---------------------|--------------------|
| A. 1.5V – 2V | B. 2V- 2.5V |
| C. 0.5V-1V | D. 1V-1.5V |
307. The best suited mirror to use in solar cooker is _____
- | | |
|-------------------|---------------------|
| A. Concave | B. Convex |
| C. Plain | D. Spherical |
308. Which one of the following is used as a rocket fuel _____ *
- | | |
|--------------------|-----------------------|
| A. CNG | B. Petrol |
| C. Hydrogen | D. Natural Gas |
309. The following is not used as a fuel in Nuclear reactor_____
- | | |
|---------------------|-------------------|
| A. Uranium | B. Barium |
| C. Plutonium | D. Thorium |
310. The Main component of bio gas is _____
- | | |
|-------------------|-------------------|
| A. Propane | B. Butane |
| C. Ethane | D. Methane |
311. The minimum wind speed required to maintain the speed of the turbine of wind mill is _____
- | | |
|------------------------|-------------------------|
| A. Above 10km/h | B. Above 12 km/h |
| C. Above13 km/h | D. Above 15 km/h |
312. The slurry left behind after the production of biogas is an excellent manure because_____
- | | |
|--|--|
| A. It is rich in Nitrogen & Phosphorous | B. It is rich in Carbon & Sulphur |
| C. It is rich in Fluorine & Chlorine | D. It is rich in Carbon & Oxygen |
313. Silver is used for interconnection of cells in the solar panel because_____ *
- | |
|---|
| A. It is costly & Shining |
| B. It is a good conductor of electricity and non rusting |
| C. It is of low cost &non-rusting |
| D. It is a bad conductor of electricity |

314. The difference in the temperature of the water at the surface of the sea and in the deeper sections of sea is exploited to obtain _____
- A. Geothermal energy
 - B. Tidal energy
 - C. Ocean thermal energy
 - D. Thermal energy
315. The principle of nuclear bomb is _____
- A. Uncontrolled Nuclear fission
 - B. Controlled nuclear fission
 - C. Nuclear fusion
 - D. Thermo nuclearfusion
316. The principle of solar cell is _____
- A. Light energy is converted to heat energy
 - B. Heat energy is converted into light energy
 - C. Light energy is converted into electricity
 - D. Light energy is converted into Chemical energy
317. The principle of solar cooker is _____
- A. Light energy is converted into Heat energy
 - B. Heat energy is converted into Light energy.
 - C. Heat energy is converted into Chemical energy
 - D. Light energy is converted into Mechanical energy.
318. A turbine cannot be rotated by _____*
- A. Flowing water
 - B. Heat of sun
 - C. Steam
 - D. Moving wind
319. Energy produced in Nuclear power plant by _____*
- A. Controlled nuclear fission
 - B. Uncontrolled nuclear fission
 - C. Nuclear fusion
 - D. Thermo nuclear fission

CHAPTER - 15

Our Environment

320. The correct statement with respect to bio-degradable substances among the following is, these substances *
- A. Remain inert in the environment for a long period.
 - B. Harms various organisms in the eco system
 - C. Increase the density of harmful chemicals in different tropic levels.
 - D. Undergo recycling naturally in the environment.
321. Two steps of formation of ozone layer *
- A. $O_2 + O \rightarrow O_3$, $O_2 + O \rightarrow O_3$
 - B. $O_2 \rightarrow O + O$, $O_2 + O \rightarrow O_3$
 - C. $O_2 + O_2 \rightarrow O_3$, $O_2 + O \rightarrow O_3$
 - D. $O + O \rightarrow O_2$, $O_2 + O \rightarrow O_3$
322. The materials that change slowly their form and nature are *
- A. Used tea leaves
 - B. Peels of vegetables
 - C. Waste papers
 - D. Plant fibres
323. Ozone layer is formed from the oxygen at the higher levels of the atmosphere by the action of **
- A. X rays
 - B. Ultra violet rays
 - C. Infrared radiation
 - D. Radio waves
324. Molecular formula of Ozone is
- A. O
 - B. O_2
 - C. O_3
 - D. H_2O
325. The chemical present in CFC which is responsible for declination of ozone layer is
- A. Chlorine
 - B. Fluorine
 - C. Carbon
 - D. Oxygen
326. Bio-degradable substance among the following is
- A. DDT
 - B. Agriculture waste
 - C. Plastic
 - D. Glass

327. Eco friendly fuel is
- A. Petrol
 - B. Kerosene
 - C. Biogas
 - D. LPG
328. Reason for acid rain is
- A. Deforestation
 - B. Sulphur and Nitrogen oxide
 - C. Fossil fuel
 - D. Nuclear waste
329. Best method to manage non-biodegradable waste is
- A. Burning
 - B. Dumping
 - C. Burying
 - D. Recycling
330. The substance responsible for the depletion of ozone layer
- A. CFC
 - B. CCF
 - C. HDFC
 - D. KFC
331. Role of ozone for organism is
- A. Supplying oxygen
 - B. Pollution control
 - C. Protection from UV rays
 - D. Supply of carbon dioxide

CHAPTER - 16

Sustainable Management of Natural Resources

332. Water harvesting is a method which _____ *
- A. Increase ground water level
 - B. Not practiced in modern days
 - C. Has no relation with the groundwater
 - D. Decrease groundwater level.
333. The practice of using used materials without changing their shape and form is _____*
- A. Reuse
 - B. Recycling
 - C. Repurpose
 - D. Reduce
334. Kulha is a type of _____ *
- A. Dam
 - B. Lake
 - C. Canal
 - D. Well

335. Floods can be prevented by____*
- | | |
|-------------------------|--------------------------------|
| A. Afforestation | B. Removing of top soil |
| C. Deforestation | D. Agriculture |
336. Coliform is a _____
- | | |
|-----------------------------|-----------------------------|
| A. Group of bacteria | B. Group of virus |
| C. Group of fungi | D. Group of protozoa |
337. The name given for replenishment of forest_____
- | | |
|-------------------------|-------------------------|
| A. Afforestation | B. Silviculture |
| C. Deforestation | D. Siri culture. |
338. Khadins,Bundhis,Ahars and Katta's are ancient structures used for _____
- | | |
|----------------------------|-----------------------------|
| A. Grain storage | B. Wood storage |
| C. Water harvesting | D. Soil Conservation |
339. Arbari forest of Bengal is dominated by _____
- | | |
|------------------|---------------------|
| A. Teak | B. Sal |
| C. Bamboo | D. Mangroves |
340. Tehri dam is built on the river_____
- | | |
|------------------|-----------------|
| A. Yamuna | B. Ganga |
| C. Satlej | D. Beas |
341. Following is a greenhouse gas_____
- | | |
|--------------------------|---------------------------|
| A. Nitrogen oxide | B. Sulphur dioxide |
| C. Carbon dioxide | D. Carbon monoxide |
342. If you paint old chair to make a new, you are _____
- | | |
|----------------------|--------------------|
| A. Recycling | B. Reusing |
| C. Recovering | D. Reducing |
343. Amrutha Devi Bishnoi sacrifice her life to protect the _____
- | | |
|----------------------|---------------------------|
| A. Palm Trees | B. Khejri trees |
| C. Sal trees | D. Teak wood trees |

344. The main causes for abundant coliform bacteria in the river Ganga is _____
- A. Disposal of human excreta directly
 - B. Discharge of effluents from electroplating industries
 - C. Agricultural wastes
 - D. Immersion of ashes
345. The Indira Gandhi canal has brought greenery to considerable areas of _____
- A. Gujarat
 - B. Rajasthan
 - C. Bihar
 - D. Madhya Pradesh
346. The natural resources is defined as _____
- A. Found on land
 - B. Man made substances
 - C. Forest products
 - D. A gift of nature very useful to mankind
347. The following community in Rajasthan has a religious tenet of conservation of forest and wildlife _____
- A. Munda
 - B. Jaishwal
 - C. Bishal
 - D. Bishnoi
348. Ground water will not be depleted due to _____
- A. Afforestation
 - B. Thermal Power plants
 - C. Loss of forest and decreased rain fall
 - D. Cropping of high water demanding crops
349. Primary source of water is _____
- A. Rivers
 - B. Ground water
 - C. Lakes
 - D. Rain water
350. The biodiversity hot spot is found in _____
- A. Rivers
 - B. Forests
 - C. Deserts
 - D. Oceans
351. Canal system of Dams _____
- A. Transfer large amounts of water over great distance
 - B. Appears good
 - C. Can decrease water pressure
 - D. Can connect other dams.

ANSWER KEY

Q.No	Answer	Q.No	Answer	Q.No	Answer	Q.No	Answer	Q.No	Answer	Q.No	Answer
1	B	34	A	67	C	100	A	133	D	166	A
2	A	35	B	68	D	101	C	134	D	167	C
3	C	36	D	69	B	102	A	135	A	168	D
4	B	37	B	70	D	103	D	136	A	169	A
5	D	38	B	71	A	104	C	137	C	170	C
6	A	39	B	72	C	105	B	138	A	171	C
7	D	40	D	73	B	106	D	139	D	172	A
8	B	41	C	74	C	107	B	140	B	173	A
9	D	42	A	75	A	108	C	141	D	174	B
10	B	43	C	76	C	109	A	142	C	175	D
11	C	44	A	77	A	110	D	143	A	176	B
12	A	45	C	78	A	111	C	144	B	177	A
13	B	46	B	79	D	112	D	145	D	178	B
14	A	47	C	80	B	113	A	146	A	179	C
15	A	48	A	81	D	114	A	147	C	180	D
16	B	49	D	82	D	115	B	148	D	181	D
17	A	50	B	83	B	116	C	149	C	182	C
18	D	51	C	84	D	117	D	150	A	183	B
19	A	52	B	85	D	118	C	151	B	184	A
20	B	53	D	86	C	119	B	152	B	185	C
21	C	54	C	87	A	120	A	153	D	186	D
22	B	55	A	88	B	121	C	154	A	187	A
23	A	56	D	89	C	122	B	155	C	188	B
24	D	57	D	90	A	123	D	156	C	189	A
25	A	58	D	91	D	124	A	157	B	190	C
26	C	59	A	92	D	125	B	158	B	191	B
27	D	60	C	93	B	126	C	159	B	192	D
28	B	61	C	94	A	127	B	160	D	193	B
29	C	62	B	95	A	128	A	161	C	194	A
30	B	63	D	96	C	129	C	162	B	195	C
31	D	64	C	97	C	130	B	163	A	196	B
32	C	65	B	98	D	131	C	164	D	197	C
33	A	66	B	99	B	132	A	165	C	198	D

Q.No	Answer	Q.No	Answer	Q.No	Answer	Q.No	Answer	Q.No	Answer	Q.No	Answer
199	A	234	C	269	D	304	C	339	B		
200	C	235	D	270	C	305	D	340	B		
201	A	236	A	271	D	306	C	341	C		
202	B	237	D	272	C	307	A	342	B		
203	A	238	D	273	D	308	C	343	B		
204	C	239	B	274	C	309	B	344	A		
205	B	240	D	275	B	310	D	345	B		
206	C	241	A	276	C	311	D	346	D		
207	A	242	C	277	A	312	A	347	D		
208	D	243	D	278	A	313	B	348	A		
209	D	244	D	279	D	314	C	349	D		
210	B	245	A	280	A	315	A	350	B		
211	D	246	C	281	A	316	C	351	A		
212	B	247	C	282	C	317	A				
213	A	248	D	283	C	318	B				
214	A	249	B	284	B	319	A				
215	C	250	B	285	C	320	D				
216	C	251	A	286	B	321	B				
217	D	252	A	287	D	322	D				
218	B	253	C	288	C	323	B				
219	C	254	B	289	D	324	C				
220	A	255	A	290	A	325	A				
221	C	256	B	291	B	326	B				
222	C	257	A	292	C	327	C				
223	B	258	D	293	A	328	B				
224	A	259	C	294	A & C	329	D				
225	D	260	C	295	C	330	A				
226	C	261	C	296	B	331	C				
227	B	262	D	297	C	332	A				
228	B	263	B	298	B	333	C				
229	A	264	C	299	C	334	B				
230	C	265	B	300	A	335	A				
231	D	266	A	301	C	336	A				
232	B	267	A	302	C	337	A				
233	C	268	C	303	B	338	C				